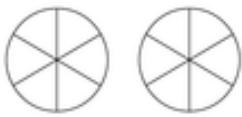


Comparing proper & improper fractions

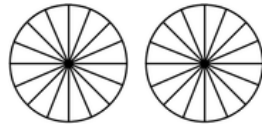
Grade 4 Fractions Worksheet

Write > (greater than), < (less than) or = (equal to) between the fractions. Color in the fractions if it helps.

1)



$$\frac{7}{6}$$

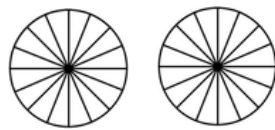


$$\frac{19}{16}$$

3)

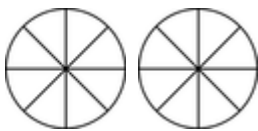


$$\frac{13}{16}$$

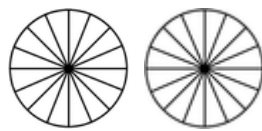


$$\frac{17}{16}$$

5)

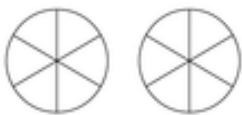


$$\frac{11}{8}$$

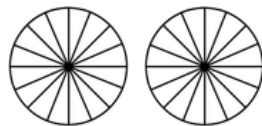


$$\frac{22}{16}$$

7)



$$\frac{8}{6}$$

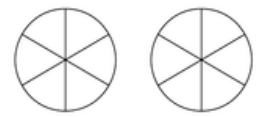


$$\frac{21}{16}$$

2)

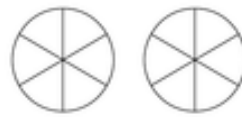


$$\frac{5}{3}$$

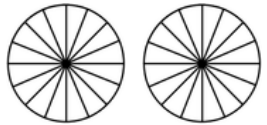


$$\frac{10}{6}$$

4)



$$\frac{10}{6}$$

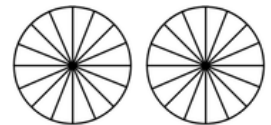


$$\frac{26}{16}$$

6)



$$\frac{2}{3}$$



$$\frac{19}{16}$$

8)



$$\frac{5}{4}$$



$$\frac{15}{16}$$