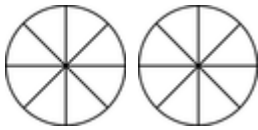


# Comparing proper & improper fractions

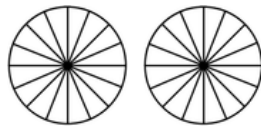
## Grade 4 Fractions Worksheet

Write > (greater than), < (less than) or = (equal to) between the fractions. Color in the fractions if it helps.

1)



$$\frac{13}{8}$$

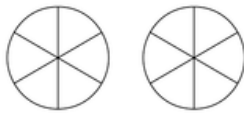


$$\frac{26}{16}$$

3)

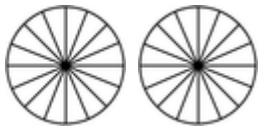


$$\frac{12}{16}$$

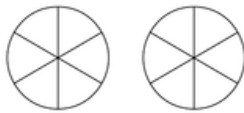


$$\frac{7}{6}$$

5)



$$\frac{21}{16}$$



$$\frac{8}{6}$$

7)

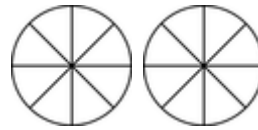


$$\frac{14}{16}$$

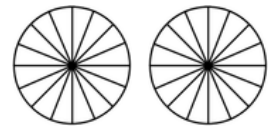


$$\frac{4}{3}$$

2)

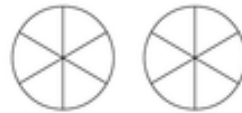


$$\frac{10}{8}$$



$$\frac{20}{16}$$

4)



$$\frac{8}{6}$$

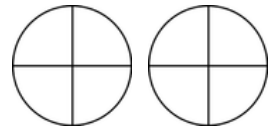


$$\frac{4}{3}$$

6)



$$\frac{14}{16}$$




$$\frac{5}{4}$$

8)



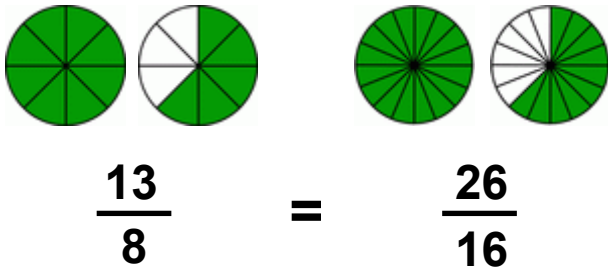
$$\frac{7}{4}$$



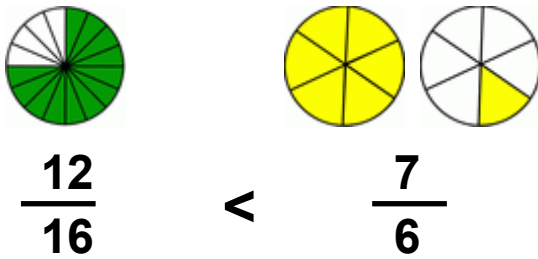
$$\frac{28}{16}$$

## Answers

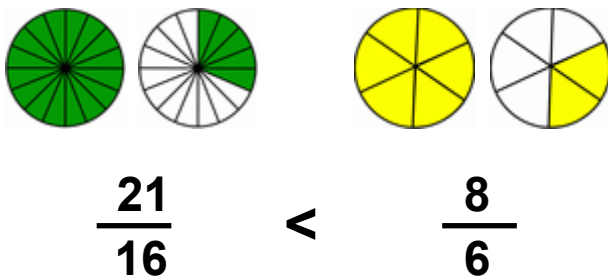
1)



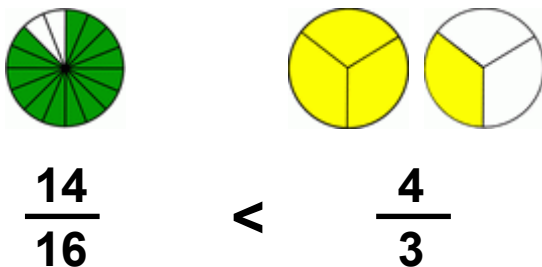
3)



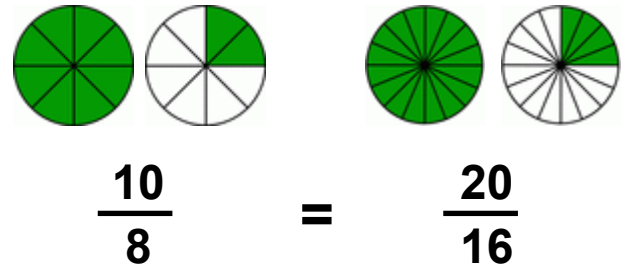
5)



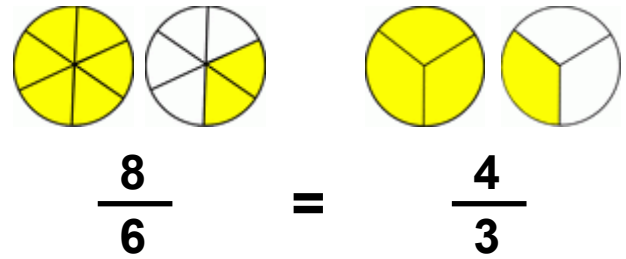
7)



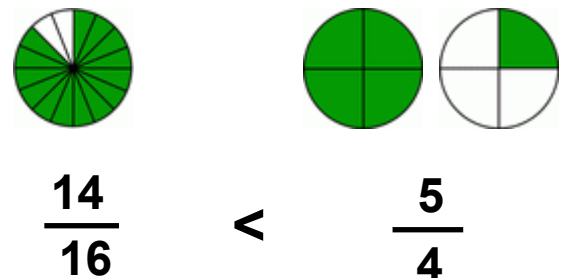
2)



4)



6)



8)

