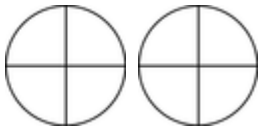


# Comparing proper & improper fractions

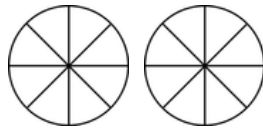
## Grade 4 Fractions Worksheet

Write > (greater than), < (less than) or = (equal to) between the fractions. Color in the fractions if it helps.

1)

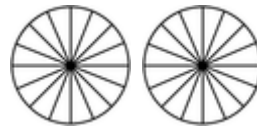


$$\frac{5}{4}$$

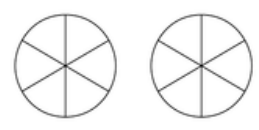


$$\frac{11}{8}$$

2)



$$\frac{18}{16}$$



$$\frac{7}{6}$$

3)

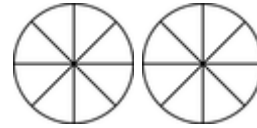


$$\frac{13}{16}$$

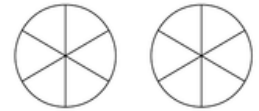


$$\frac{4}{3}$$

4)



$$\frac{12}{8}$$

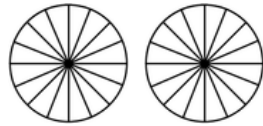


$$\frac{9}{6}$$

5)

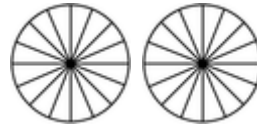


$$\frac{5}{6}$$

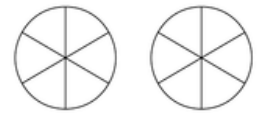


$$\frac{19}{16}$$

6)



$$\frac{21}{16}$$

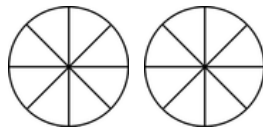


$$\frac{8}{6}$$

7)

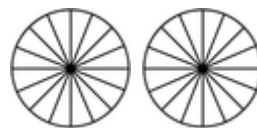


$$\frac{2}{3}$$

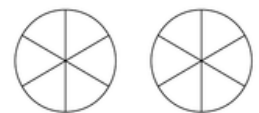


$$\frac{11}{8}$$

8)



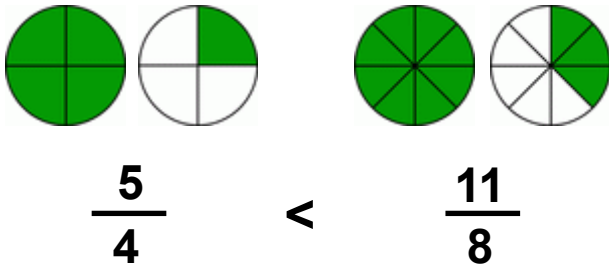
$$\frac{27}{16}$$



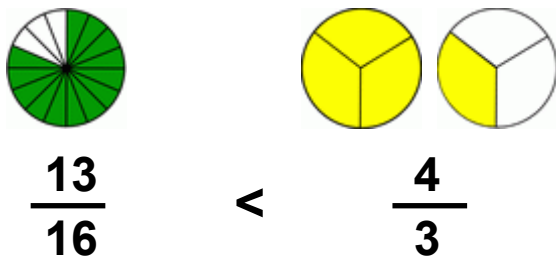
$$\frac{10}{6}$$

## Answers

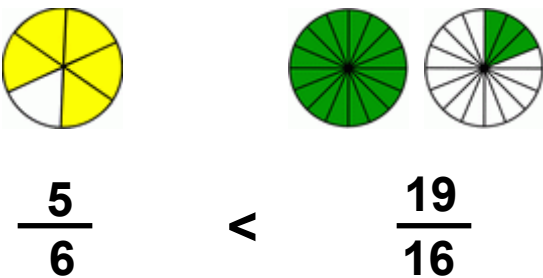
1)



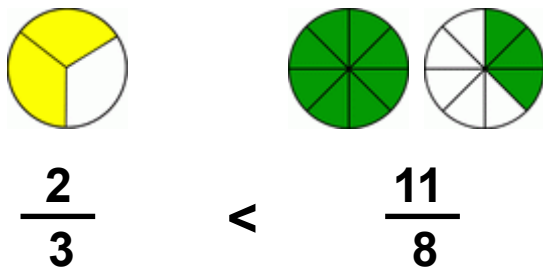
3)



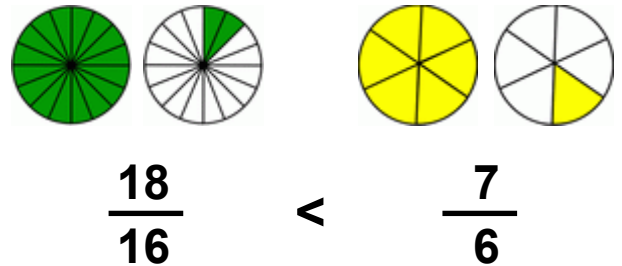
5)



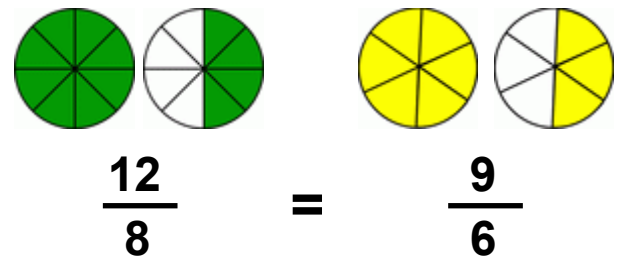
7)



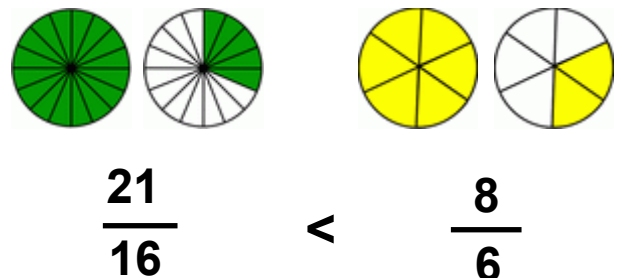
2)



4)



6)



8)

