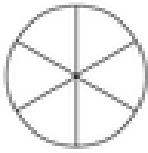


# Comparing proper fractions

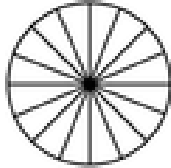
## Grade 4 Fractions Worksheet

Write > (greater than), < (less than) or = (equal to) between the fractions. Color in the fractions if it helps.

1)



$$\frac{4}{6}$$

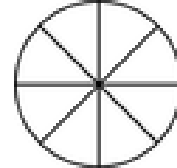


$$\frac{10}{16}$$

2)



$$\frac{13}{16}$$

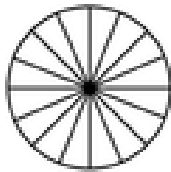


$$\frac{5}{8}$$

3)



$$\frac{1}{8}$$

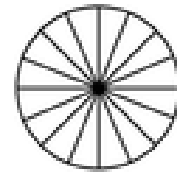


$$\frac{3}{16}$$

4)



$$\frac{2}{3}$$

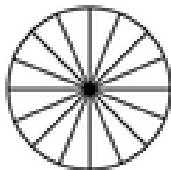


$$\frac{11}{16}$$

5)

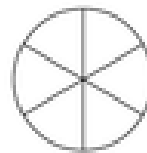


$$\frac{1}{3}$$

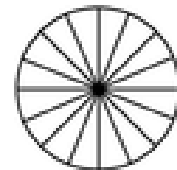


$$\frac{7}{16}$$

6)

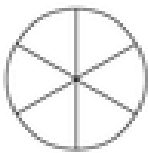


$$\frac{3}{6}$$

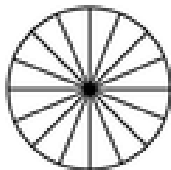


$$\frac{12}{16}$$

7)

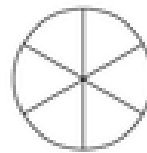


$$\frac{2}{6}$$

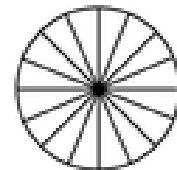


$$\frac{6}{16}$$

8)



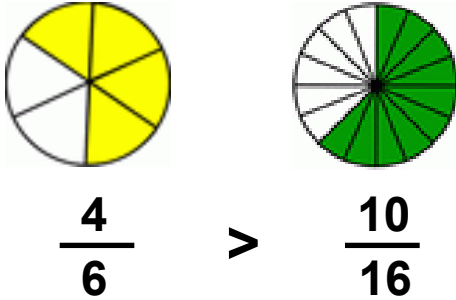
$$\frac{1}{6}$$



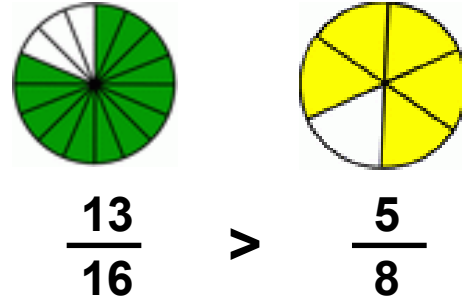
$$\frac{4}{16}$$

## Answers

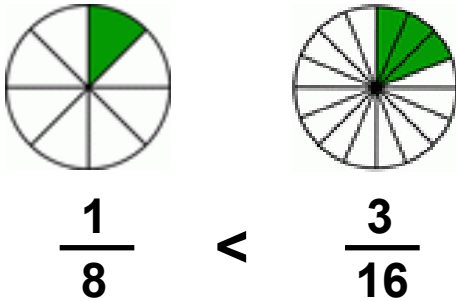
1)



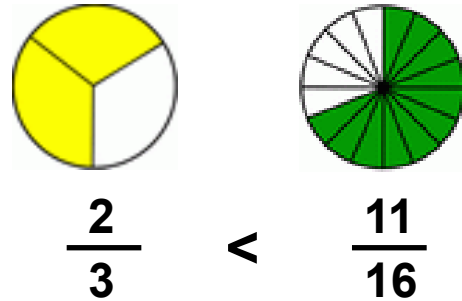
2)



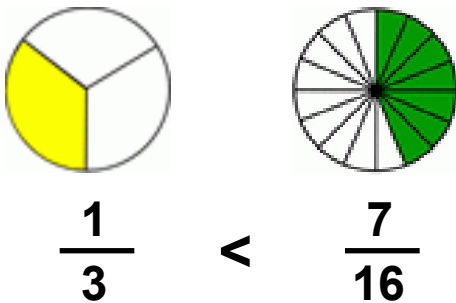
3)



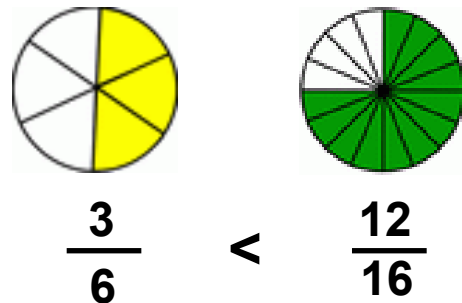
4)



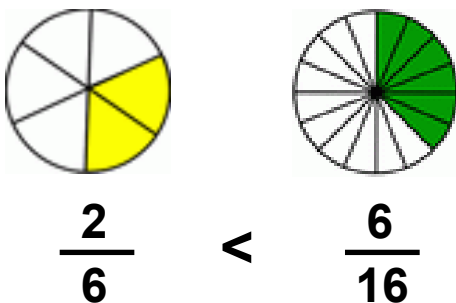
5)



6)



7)



8)

