

Comparing proper fractions

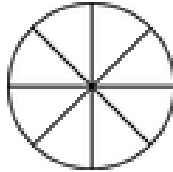
Grade 4 Fractions Worksheet

Write > (greater than), < (less than) or = (equal to) between the fractions. Color in the fractions if it helps.

1)



$$\frac{2}{3}$$

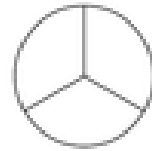


$$\frac{3}{8}$$

2)

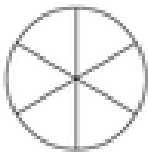


$$\frac{10}{16}$$

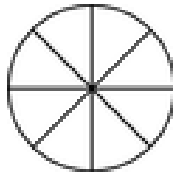


$$\frac{2}{3}$$

3)



$$\frac{1}{6}$$

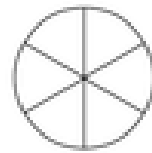


$$\frac{1}{8}$$

4)



$$\frac{11}{16}$$



$$\frac{4}{6}$$

5)

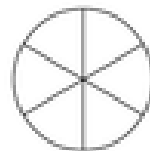


$$\frac{2}{8}$$

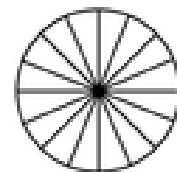


$$\frac{1}{3}$$

6)

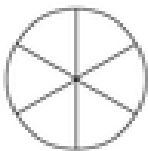


$$\frac{2}{6}$$

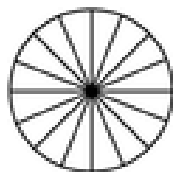


$$\frac{6}{16}$$

7)

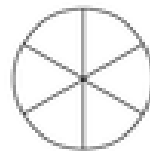


$$\frac{1}{6}$$

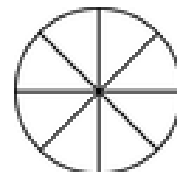


$$\frac{3}{16}$$

8)



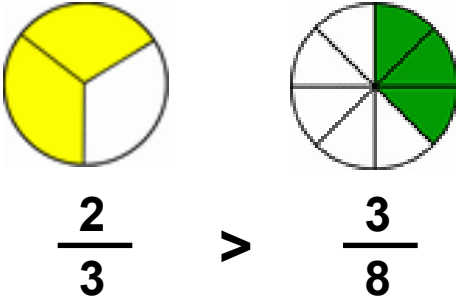
$$\frac{4}{6}$$



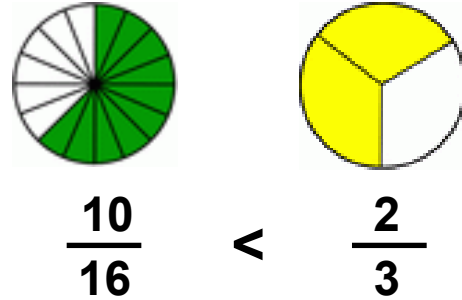
$$\frac{5}{8}$$

Answers

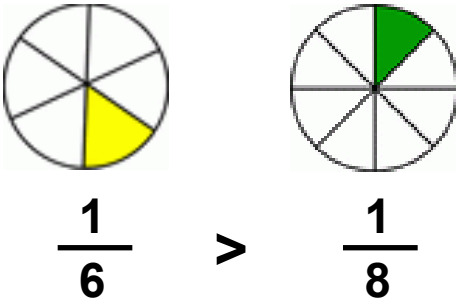
1)



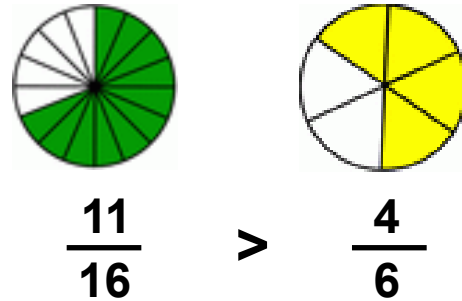
2)



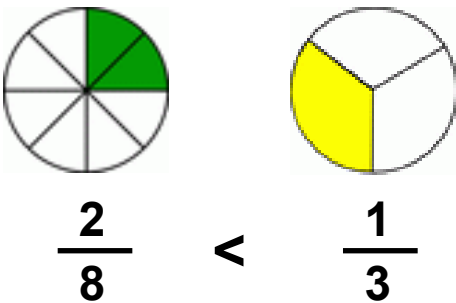
3)



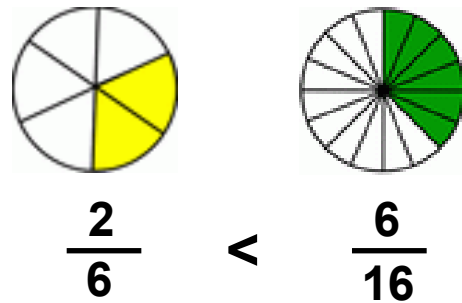
4)



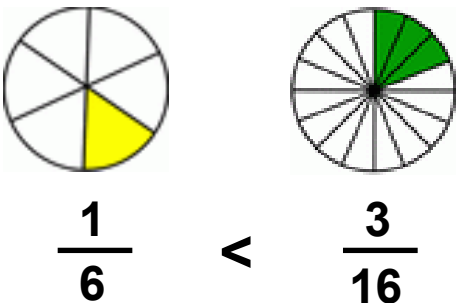
5)



6)



7)



8)

