


Fractional part of a set

Grade 4 Fractions Worksheet

Answer the question by dividing the objects into equal groups.

What is $\frac{1}{2}$ of 6? _____




What is $\frac{2}{3}$ of 9? _____



What is $\frac{1}{3}$ of 6? _____



What is $\frac{1}{4}$ of 8? _____




Fractional part of a set


Grade 4 Fractions Worksheet

Answer the question by dividing the objects into equal groups.


What is $\frac{1}{2}$ of 6? **3**



What is $\frac{2}{3}$ of 9? **6**



What is $\frac{1}{3}$ of 6? **2**



What is $\frac{1}{4}$ of 8? **2**

