

Fractional part of a set

Grade 4 Fractions Worksheet

Answer the question by dividing the objects into equal groups.


What is $\frac{3}{4}$ of 12? _____



What is $\frac{2}{5}$ of 15? _____



What is $\frac{2}{4}$ of 16? _____



What is $\frac{1}{3}$ of 24? _____




Fractional part of a set


Grade 4 Fractions Worksheet

Answer the question by dividing the objects into equal groups.

What is $\frac{3}{4}$ of 12? **9**



What is $\frac{2}{5}$ of 15? **6**



What is $\frac{2}{4}$ of 16? **8**



What is $\frac{1}{3}$ of 24? **8**

