

# Classifying quadrilaterals (square / rectangle / rhombus / parallelogram / trapezoid)

---

## Grade 4 Geometry Worksheet

Classify the quadrilaterals.

1.




\_\_\_\_\_

2.



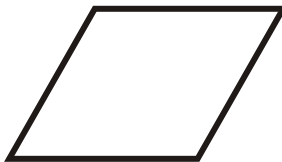
\_\_\_\_\_

3.



\_\_\_\_\_

4.



\_\_\_\_\_

5.



\_\_\_\_\_

6.




\_\_\_\_\_

7.




\_\_\_\_\_

8.



\_\_\_\_\_

9.



\_\_\_\_\_

# Classifying quadrilaterals (square / rectangle / rhombus / parallelogram / trapezoid)

---

## Grade 4 Geometry Worksheet

Classify the quadrilaterals.

1.



Rectangle

---


2.



Parallelogram

---

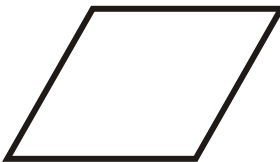
3.



Square

---

4.



Rhombus

---

5.



Trapezoid

---

6.



Trapezoid

---


7.



Rhombus

---


8.



Square

---

9.



Square

---