

Classifying triangles (equilateral / isosceles / scalene / right)

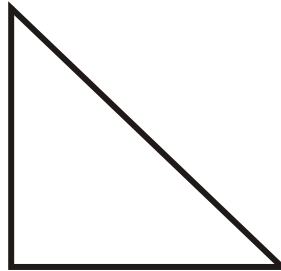
Grade 4 Geometry Worksheet

Classify the triangles.


1.



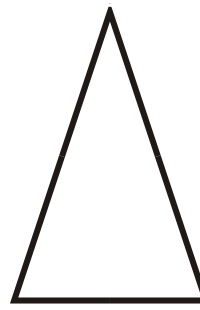
2.



3.



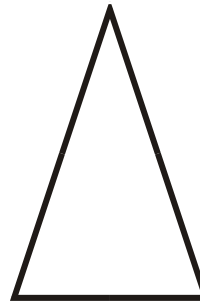
4.



5.



6.



Classifying triangles (equilateral / isosceles / scalene / right)

Grade 4 Geometry Worksheet

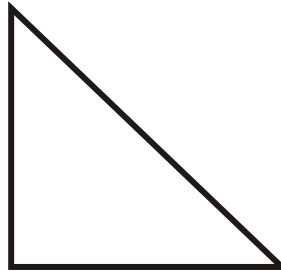
Classify the triangles.

1.




Scalene Triangle

2.



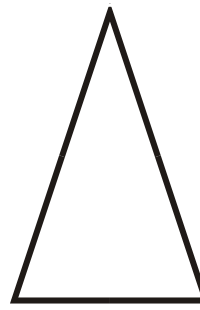
Right Triangle

3.



Equilateral Triangle

4.



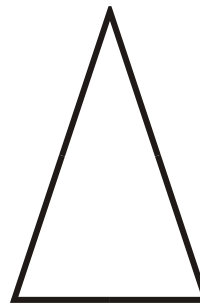
Isosceles Triangle

5.



Scalene Triangle

6.



Isosceles Triangle
