

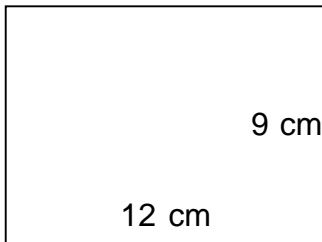
## Rectangles - area and perimeter (metric)

---

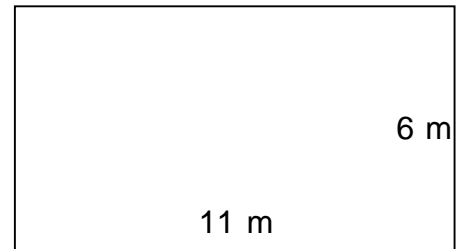
### Grade 4 Geometry Worksheet

Find the perimeter and area of each rectangle.

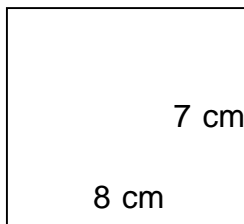
1.



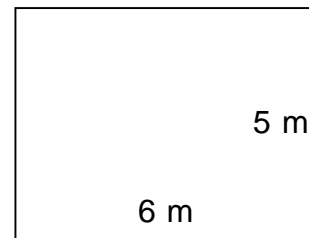
2.




3.



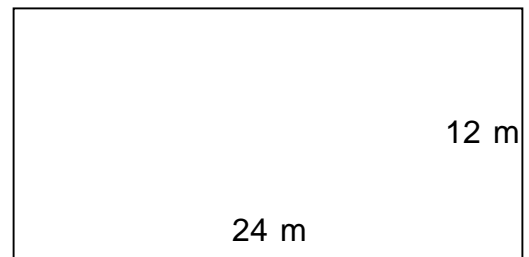
4.



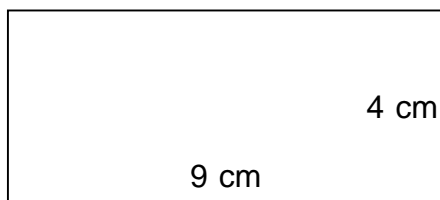
5.



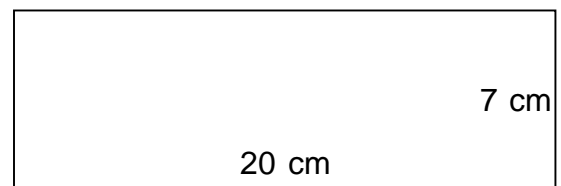
6.



7.



8.



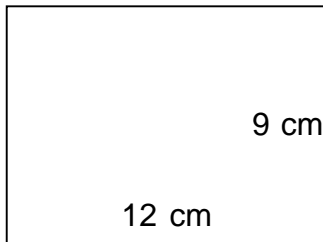
## Rectangles - area and perimeter (metric)

---

### Grade 4 Geometry Worksheet

Find the perimeter and area of each rectangle.

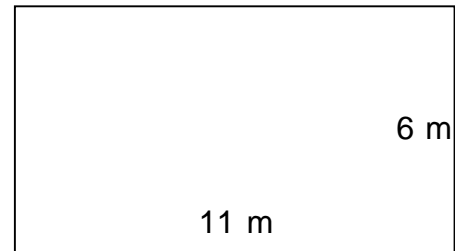
1.



---

$$P = 42 \text{ cm} \quad A = 108 \text{ cm}^2$$

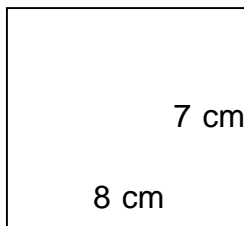
2.



---

$$P = 34 \text{ m} \quad A = 66 \text{ m}^2$$

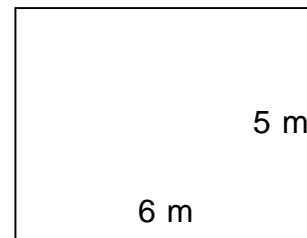
3.



---

$$P = 30 \text{ cm} \quad A = 56 \text{ cm}^2$$


4.



---

$$P = 22 \text{ m} \quad A = 30 \text{ m}^2$$

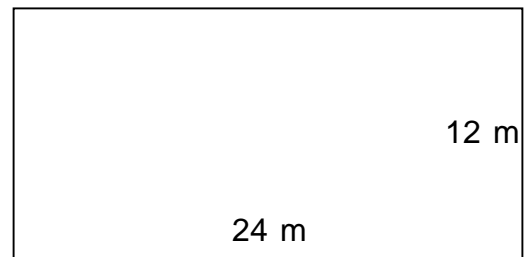
5.



---

$$P = 40 \text{ m} \quad A = 96 \text{ m}^2$$

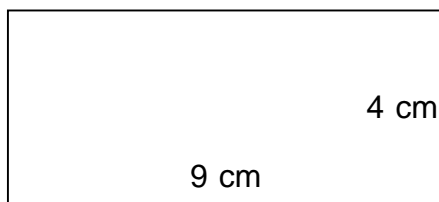
6.



---

$$P = 72 \text{ m} \quad A = 288 \text{ m}^2$$

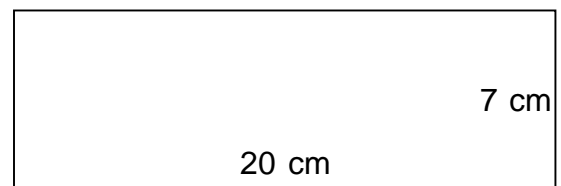
7.



---

$$P = 26 \text{ cm} \quad A = 36 \text{ cm}^2$$

8.



---

$$P = 54 \text{ cm} \quad A = 140 \text{ cm}^2$$