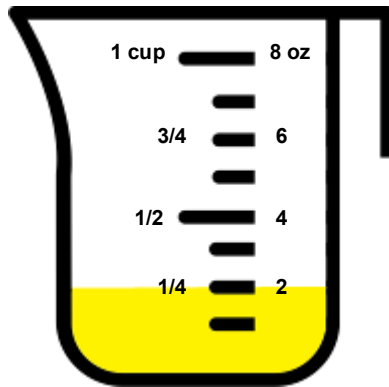


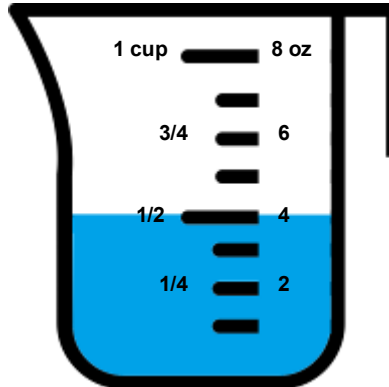
Reading measuring cups

Grade 4 Measurement Worksheet

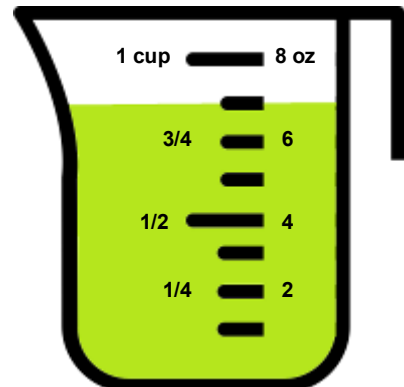
Write down the volumes of liquid in the units shown.



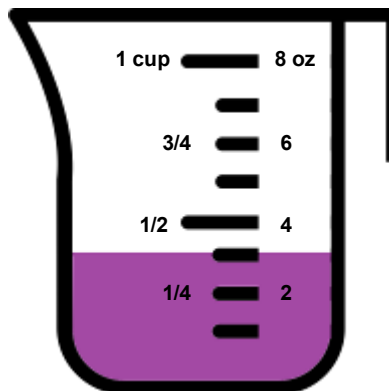
_____ cup



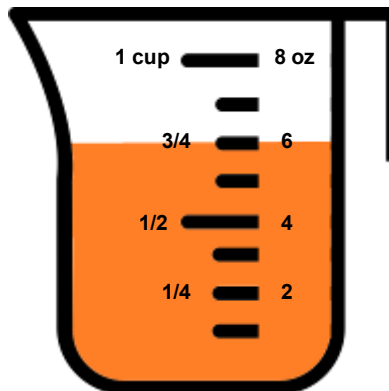
_____ cup



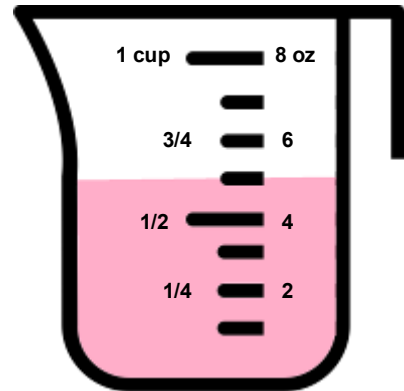
_____ OZ



_____ OZ



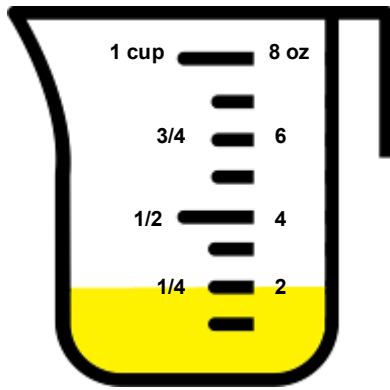
_____ cup



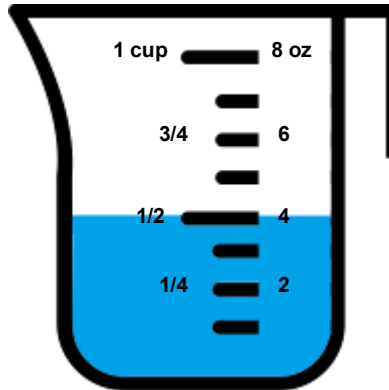
_____ OZ

- If you add the 3 top cups together, what is the total amount of liquid, measured in cups? _____
- If you add the 3 bottom cups together, what is the total amount of liquid in ounces? _____
- Is there more liquid in the top 3 cups or the bottom 3 cups? _____

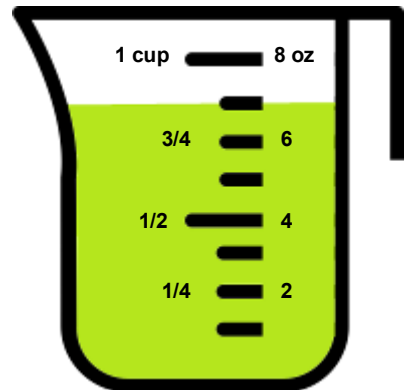
Answers



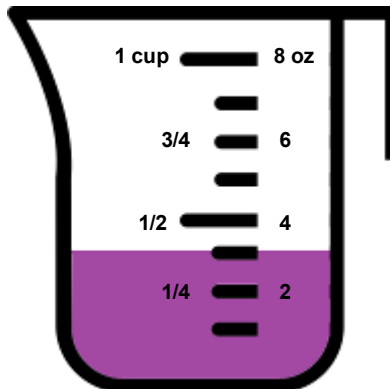
1/4 cup



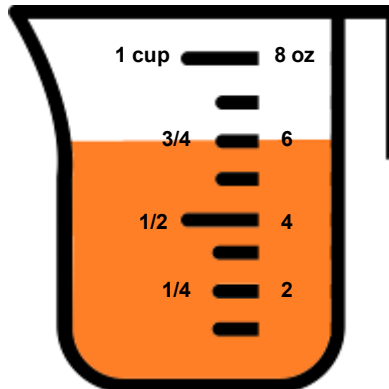
1/2 cup



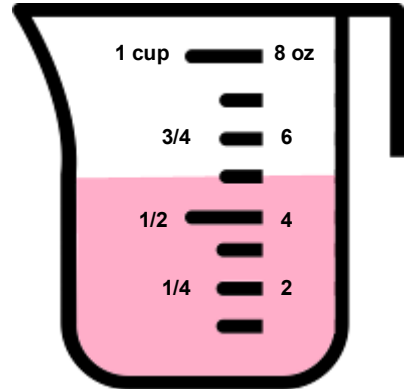
7 oz



3 oz



3/4 cup



5 oz

1. If you add the 3 top cups together, what is the total amount of liquid in cups?
2. If you add the 3 bottom cups together, what is the total amount of liquid in ounces?
3. Is there more liquid in the top 3 cups or the bottom 3 cups?

1 5/8 cups

14 ounces

Bottom 3 cups