

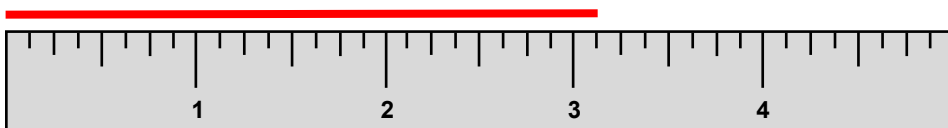
Reading rulers

Grade 4 Measurement Worksheet

Measure the length of each line.

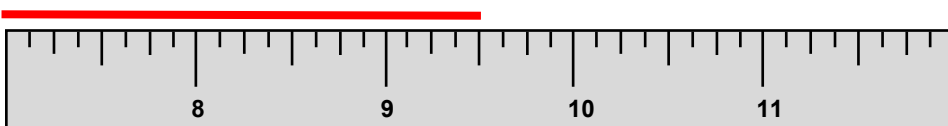
What fraction of an inch is the smallest division on the ruler? _____

1.



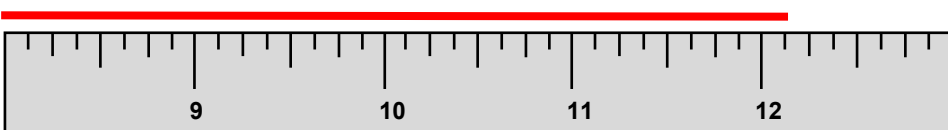
_____ in

2.



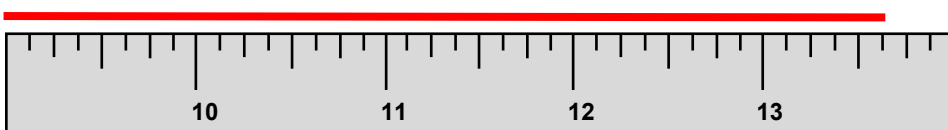
_____ in

3.



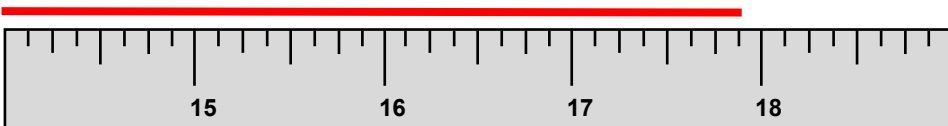
_____ in

4.



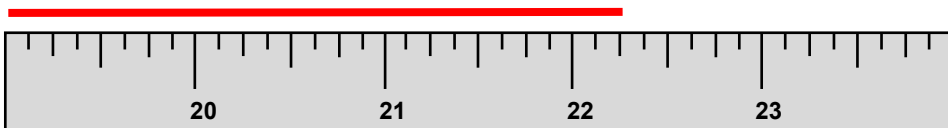
_____ in

5.



_____ in

6.



_____ in

Answers

What fraction of an inch is the smallest division on the ruler?

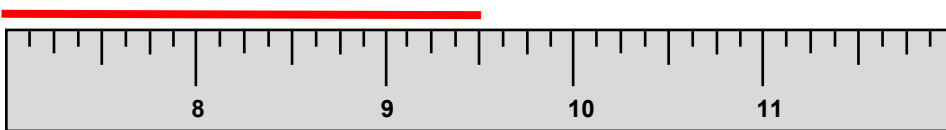
1/8th of an inch

1.



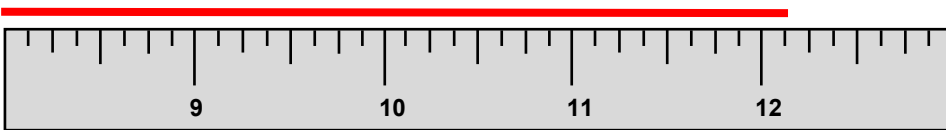
3 1/8 in

2.



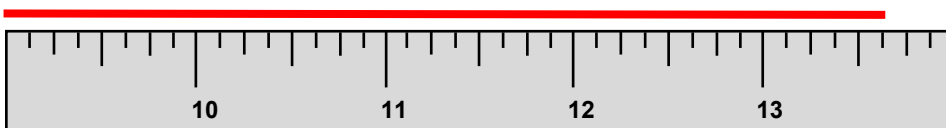
**9 4/8 in or
9 1/2 in**

3.



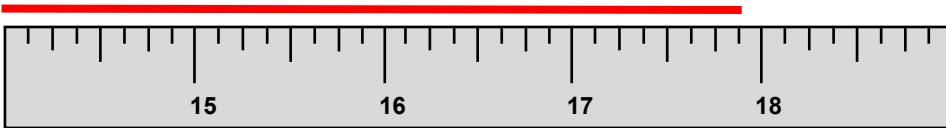
12 1/8 in

4.



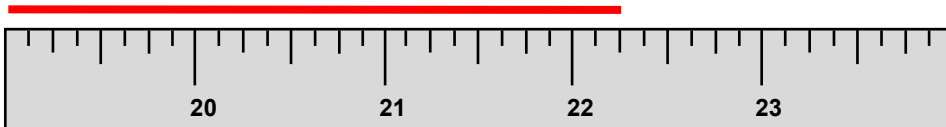
13 5/8 in

5.



17 7/8 in

6.



**22 2/8 in or
22 1/4 in**