

Equivalent fractions

Grade 4 Fractions Worksheet

Write in the missing fraction and color in the pie charts.

1)

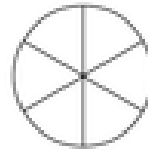


$$\frac{2}{8}$$

=

—

2)

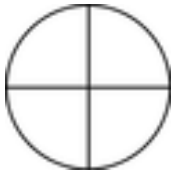


$$\frac{4}{6}$$

=

—

3)

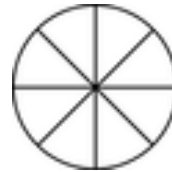


$$\frac{1}{4}$$

=

—

4)

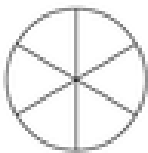


$$\frac{1}{8}$$

=

—

5)



$$\frac{2}{6}$$

=

—

6)



$$\frac{5}{8}$$

=

—

7)



$$\frac{2}{16}$$

=

—

8)



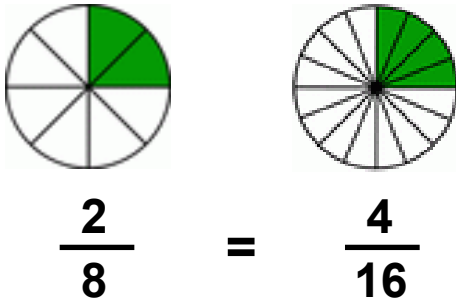
$$\frac{4}{8}$$

=

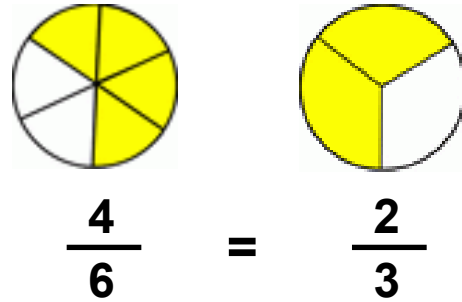
—

Answers

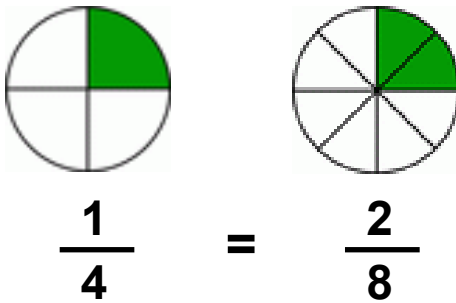
1)



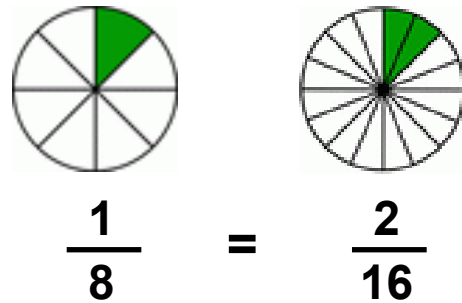
2)



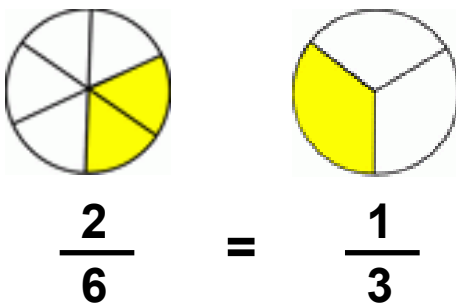
3)



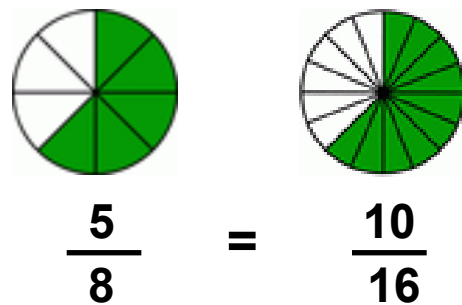
4)



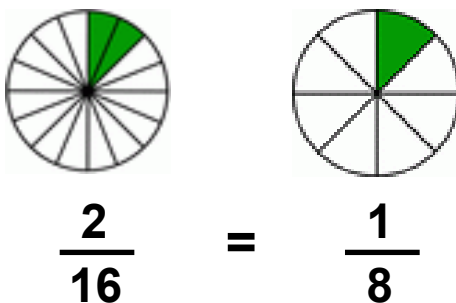
5)



6)



7)



8)

