

Equivalent fractions

Grade 4 Fractions Worksheet

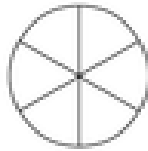
Write in the missing fraction and color in the pie charts.

1)



$$\frac{2}{3} =$$

=



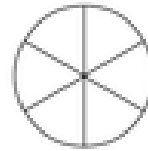
—

2)



$$\frac{1}{3} =$$

=



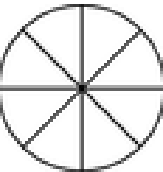
—

3)



$$\frac{10}{16} =$$

=



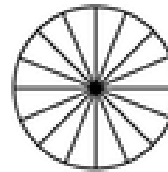
—

4)



$$\frac{4}{8} =$$

=



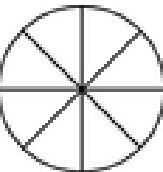
—

5)



$$\frac{2}{16} =$$

=



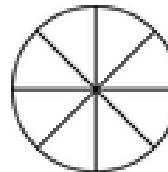
—

6)



$$\frac{1}{4} =$$

=



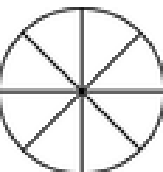
—

7)



$$\frac{8}{16} =$$

=



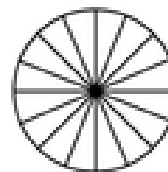
—

8)



$$\frac{1}{4} =$$

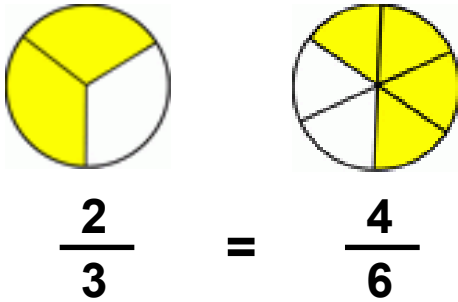
=



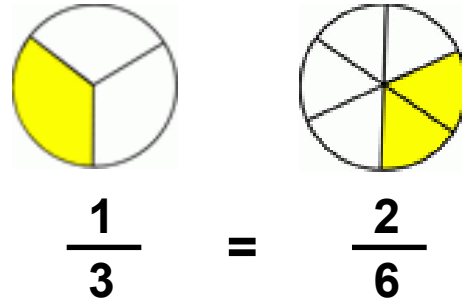
—

Answers

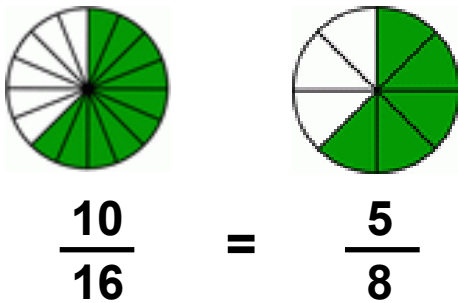
1)



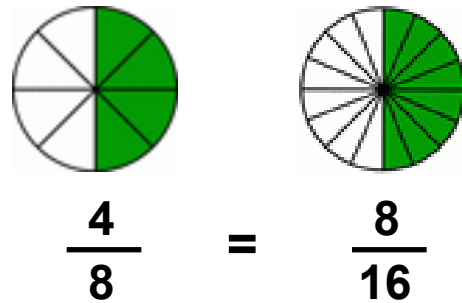
2)



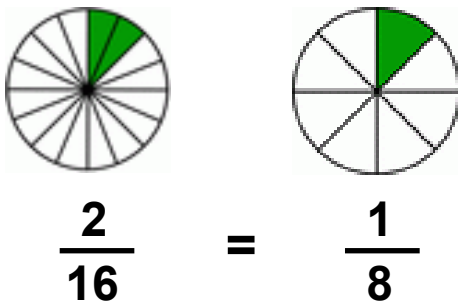
3)



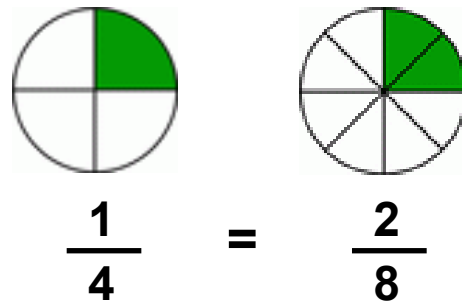
4)



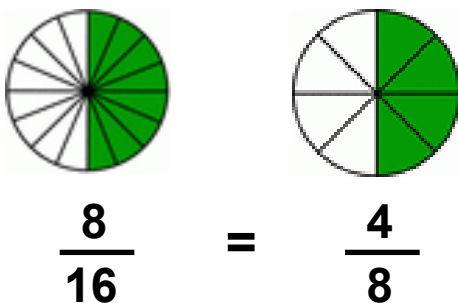
5)



6)



7)



8)

