


Classifying triangles (equilateral / isosceles / scalene / right)

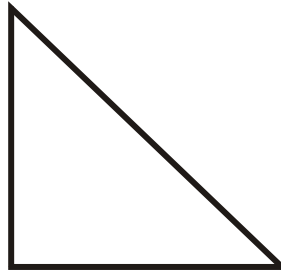
Grade 5 Geometry Worksheet

Classify the triangles.

1.



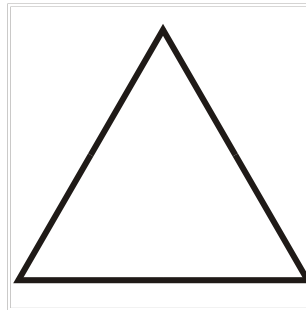
2.



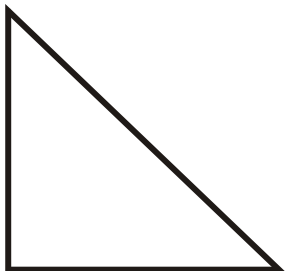
3.



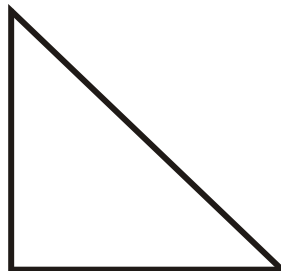
4.



5.



6.

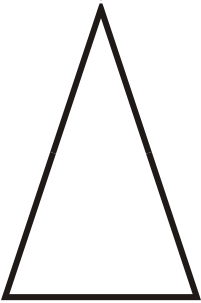


Classifying triangles (equilateral / isosceles / scalene / right)

Grade 5 Geometry Worksheet

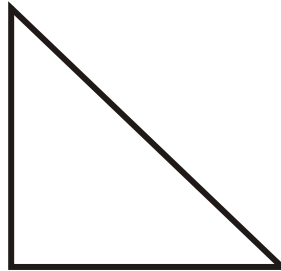
Classify the triangles.

1.



Isosceles Triangle

2.



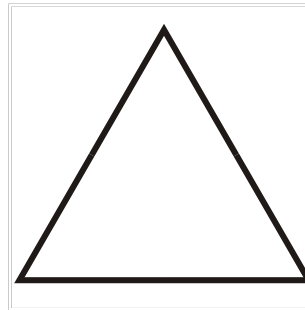
Right Triangle

3.



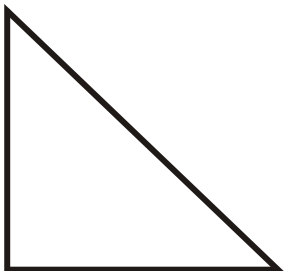
Scalene Triangle

4.



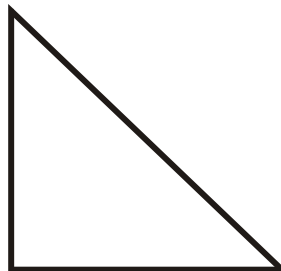
Equilateral Triangle

5.



Right Triangle

6.



Right Triangle
