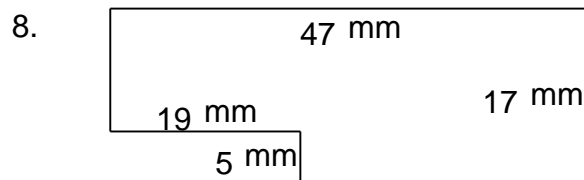
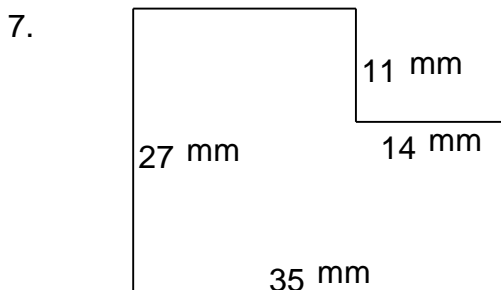
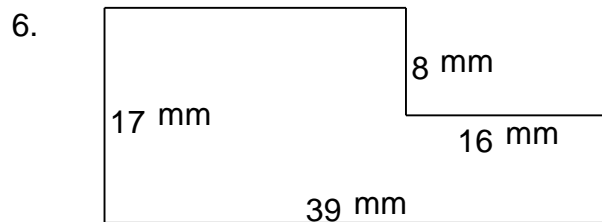
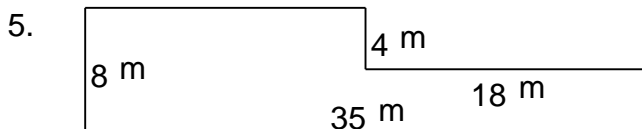
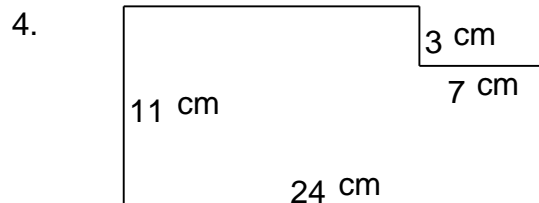
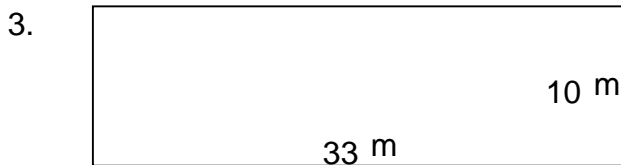
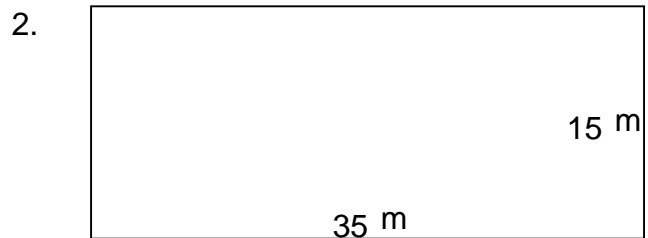
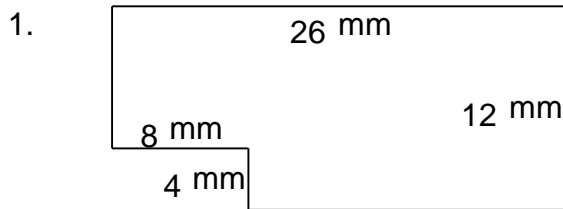


Rectangular shapes - area and perimeter

Grade 5 Geometry Worksheet

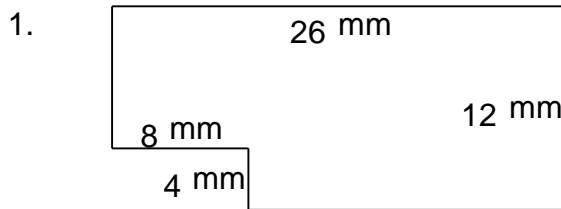
Find the perimeter and area of each rectangular shape.



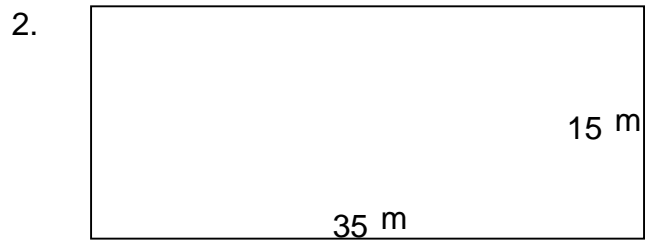
Rectangular shapes - area and perimeter

Grade 5 Geometry Worksheet

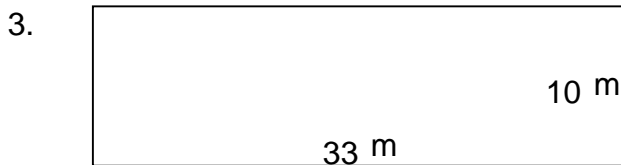
Find the perimeter and area of each rectangular shape.



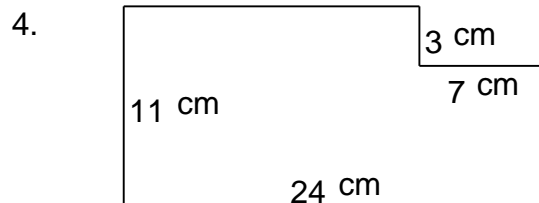
$P = 76 \text{ mm}$ $A = 280 \text{ mm}^2$



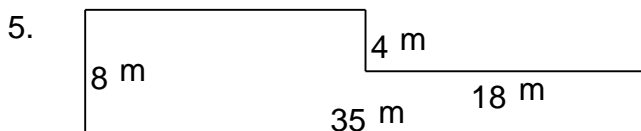
$P = 100 \text{ m}$ $A = 525 \text{ m}^2$



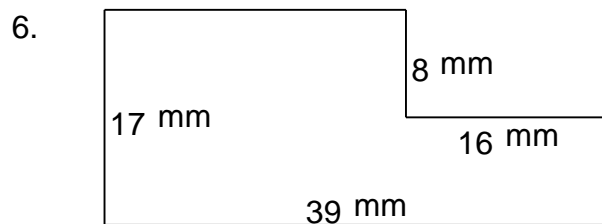
$P = 86 \text{ m}$ $A = 330 \text{ m}^2$



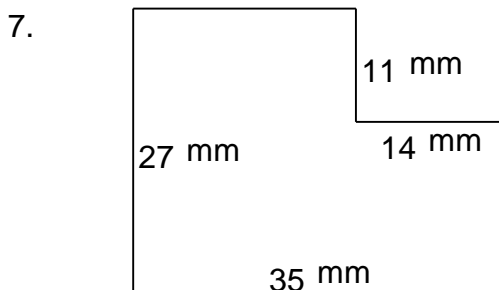
$P = 70 \text{ cm}$ $A = 243 \text{ cm}^2$



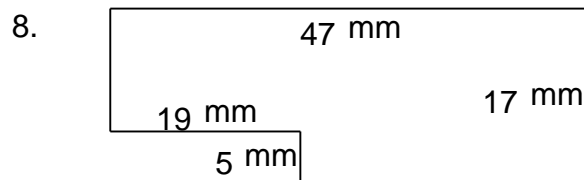
$P = 86 \text{ m}$ $A = 208 \text{ m}^2$



$P = 112 \text{ mm}$ $A = 535 \text{ mm}^2$



$P = 124 \text{ mm}$ $A = 791 \text{ mm}^2$



$P = 128 \text{ mm}$ $A = 704 \text{ mm}^2$