

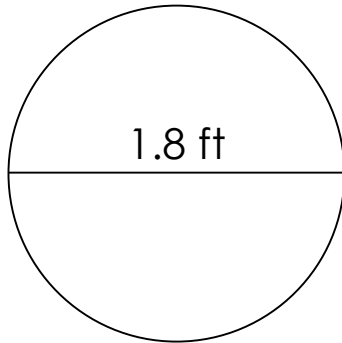
# Circumference of a circle

---

## Grade 6 Geometry Worksheet

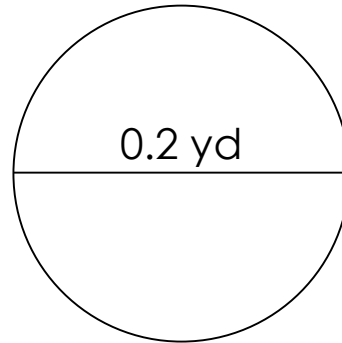
Calculate the circumference of each circle.

1)



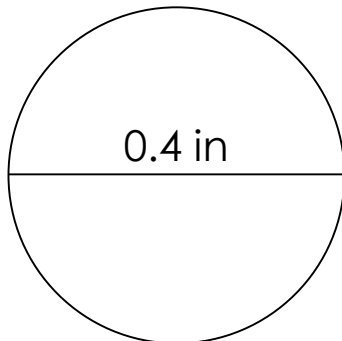
\_\_\_\_\_

2)



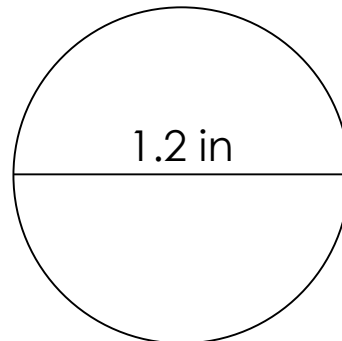
\_\_\_\_\_

3)



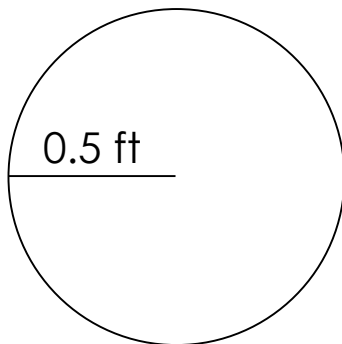
\_\_\_\_\_

4)



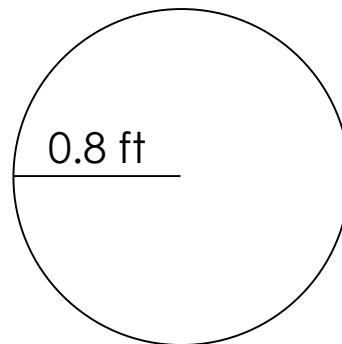
\_\_\_\_\_

5)



\_\_\_\_\_

6)



\_\_\_\_\_

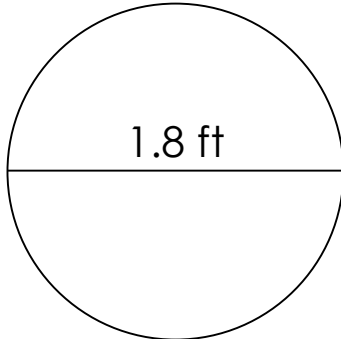
## Circumference of a circle

---

### Grade 6 Geometry Worksheet

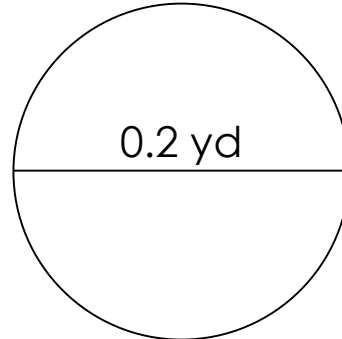
Calculate the circumference of each circle.

1)



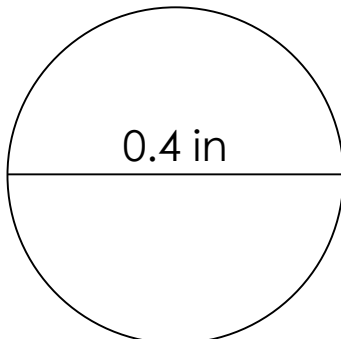
$C=5.652 \text{ ft}$

2)



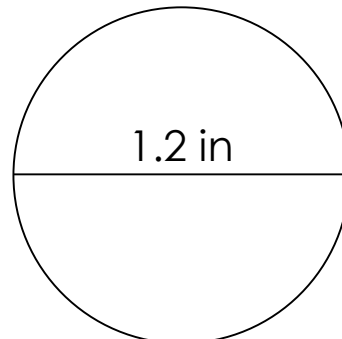
$C=0.628 \text{ yd}$

3)



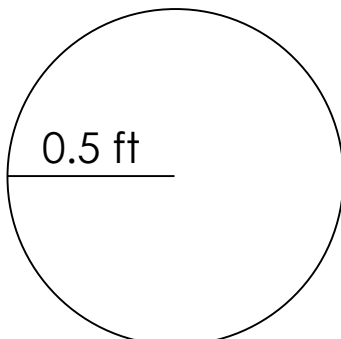
$C=1.256 \text{ in}$

4)



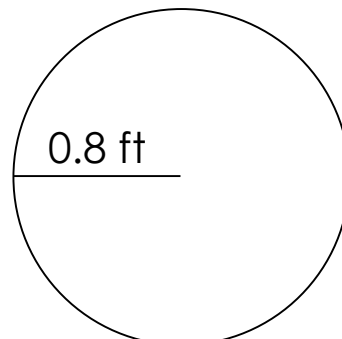
$C=3.768 \text{ in}$

5)



$C=3.140 \text{ ft}$

6)



$C=5.024 \text{ ft}$