






Weather forecasting

Grade 2 Science Worksheet

Read the graph and answer the questions.

Monday	Tuesday	Wednesday	Thursday	Friday
				
30° 25°	31° 27°	38° 32°	42° 37°	45° 39°

What will the weather be like on Friday? _____






On which days will it snow? _____

What should you wear on Monday? _____

What is the coldest it will get this week? _____

Will the weather get colder or warmer throughout the week?

Answers

Monday	Tuesday	Wednesday	Thursday	Friday
				
30° 25°	31° 27°	38° 32°	42° 37°	45° 39°

What will the weather be like on Friday? windy

On which days will it snow? Monday and Tuesday

What should you wear on Monday? winter clothes

What is the coldest it will get this week? 25°

Will the weather get colder or warmer throughout the week?

warmer