








Read a weather forecast

Grade 3 Science Worksheet

Use the weather forecast to answer the questions.

<u>Mon</u>	<u>Tue</u>	<u>Wed</u>	<u>Thu</u>	<u>Fri</u>	<u>Sat</u>	<u>Sun</u>
						
sunny	sunny	partly cloudy	cloudy and windy	rainy and windy	partly cloudy	sunny
78	74	68	61	53	65	72

What will the temperature be on Monday? _____

Which day will be the coldest? _____

Which day will be the warmest? _____








What would you wear on Tuesday? _____

What would you wear on Saturday? _____

If you have an outing to the park planned for Saturday, do you think you will go? Why or why not? _____

Which day would be best to fly a kite? Why? _____

Answers

<u>Mon</u>	<u>Tue</u>	<u>Wed</u>	<u>Thu</u>	<u>Fri</u>	<u>Sat</u>	<u>Sun</u>
						
sunny	sunny	partly cloudy	cloudy and windy	rainy and windy	partly cloudy	sunny
78	74	68	61	53	65	72

What will the temperature be on Monday? 78 degrees

Which day will be the coldest? Friday

Which day will be the warmest? Monday

What would you wear on Tuesday? Shirt and shorts

What would you wear on Saturday? sweatshirt

If you have an outing to the park planned for Saturday, do you think you will go? Why or why not? Yes.

Because weather is cool and it's not too warm.

Which day would be best to fly a kite? Thursday

Why? The kite will fly better on a windy day.