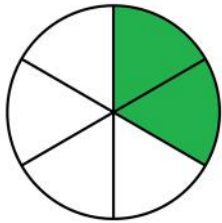


Comparing fractions with same denominator

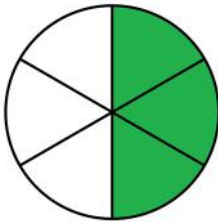
Grade 3 Fractions Worksheet

Write > (greater than), < (less than) or = (equal to) between the fractions.

1)

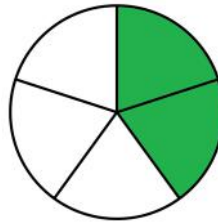


$$\frac{2}{6}$$

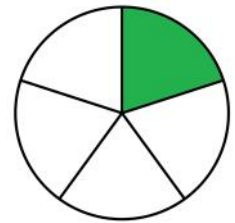


$$\frac{3}{6}$$

2)

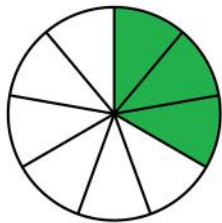


$$\frac{2}{5}$$

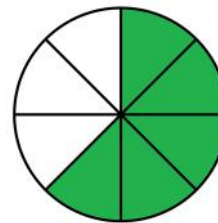


$$\frac{1}{5}$$

3)

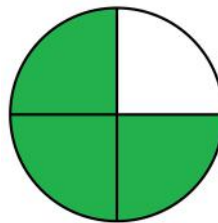


$$\frac{3}{8}$$

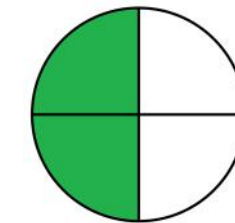


$$\frac{5}{8}$$

4)

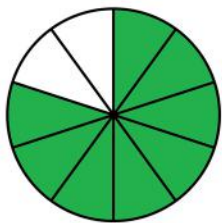


$$\frac{3}{4}$$

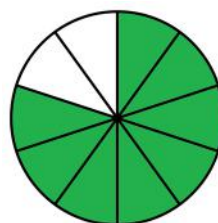


$$\frac{2}{4}$$

5)

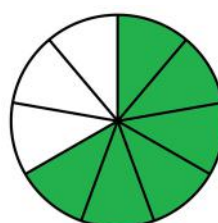


$$\frac{8}{10}$$



$$\frac{8}{10}$$

6)

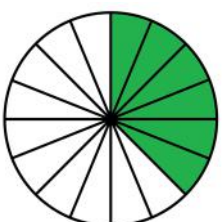


$$\frac{6}{9}$$

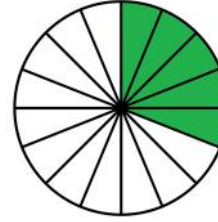


$$\frac{3}{9}$$

7)

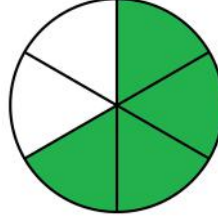


$$\frac{6}{16}$$

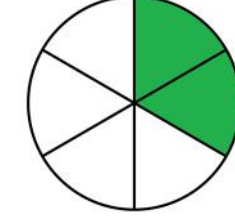


$$\frac{5}{16}$$

8)



$$\frac{4}{6}$$



$$\frac{2}{6}$$

Answers

