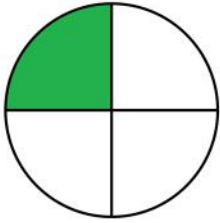
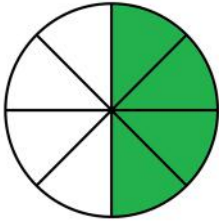
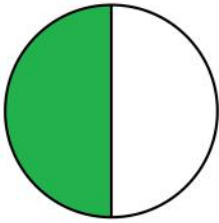
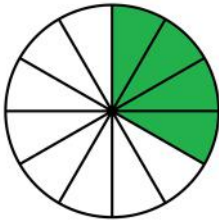


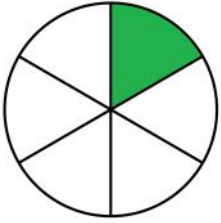
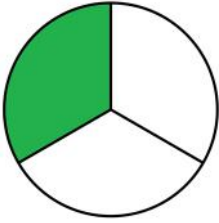
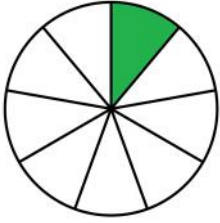
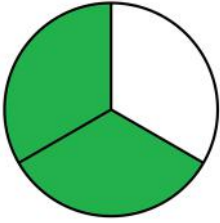
Comparing proper fractions

Grade 3 Fractions Worksheet

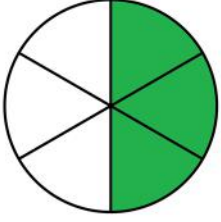
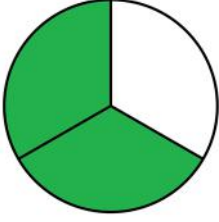
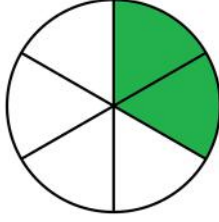
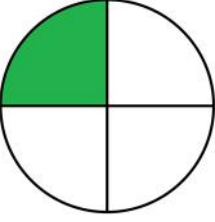
Write > (greater than), < (less than) or = (equal to) between the fractions.

1)   2)  

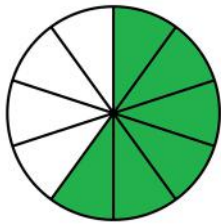
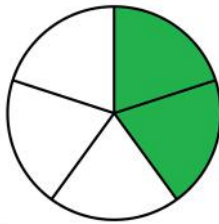
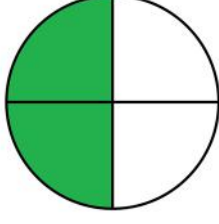
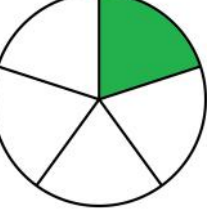
$\frac{1}{4}$ $\frac{4}{8}$ $\frac{1}{2}$ $\frac{4}{12}$

3)   4)  

$\frac{1}{6}$ $\frac{1}{3}$ $\frac{1}{9}$ $\frac{2}{3}$

5)   6)  

$\frac{3}{6}$ $\frac{2}{3}$ $\frac{2}{6}$ $\frac{1}{4}$

7)   8)  

$\frac{6}{10}$ $\frac{2}{5}$ $\frac{2}{4}$ $\frac{1}{5}$

Answers

