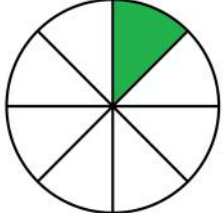
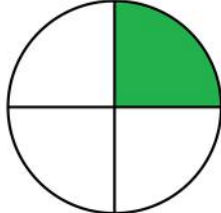
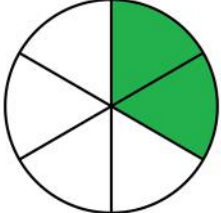
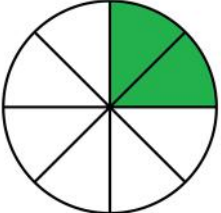


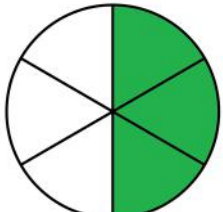
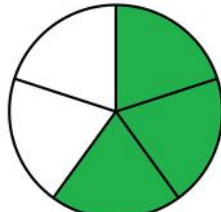
Comparing proper fractions

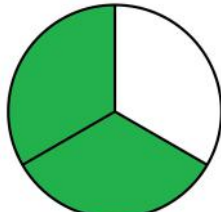
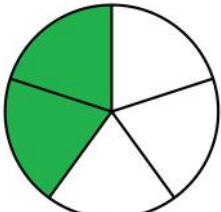
Grade 3 Fractions Worksheet

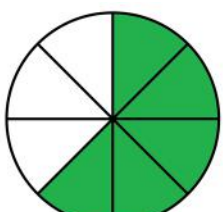
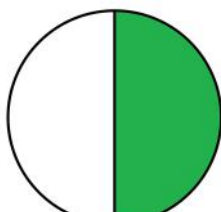
Write > (greater than), < (less than) or = (equal to) between the fractions.

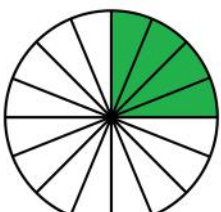
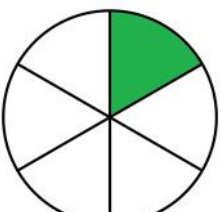
1)  
 $\frac{1}{8}$ $\frac{1}{4}$

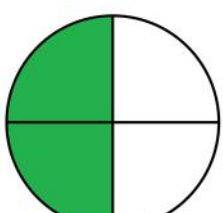
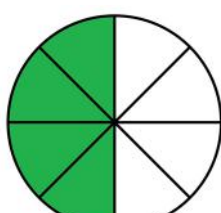
2)  
 $\frac{2}{6}$ $\frac{2}{8}$

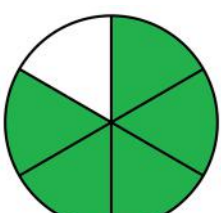
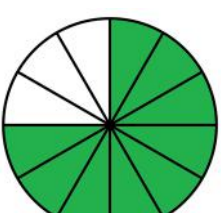
3)  
 $\frac{3}{6}$ $\frac{3}{5}$

4)  
 $\frac{2}{3}$ $\frac{2}{5}$

5)  
 $\frac{5}{8}$ $\frac{1}{2}$

6)  
 $\frac{4}{16}$ $\frac{1}{6}$

7)  
 $\frac{2}{4}$ $\frac{4}{8}$

8)  
 $\frac{5}{6}$ $\frac{9}{12}$

Answers

