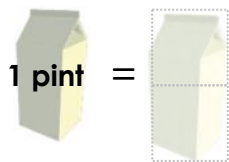


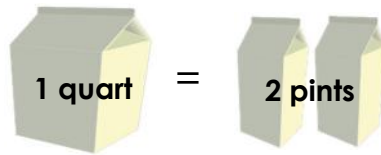
Measuring volume: cups, pints, quarts and gallons

Grade 3 Measurement Worksheet

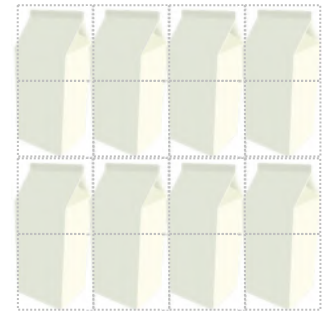
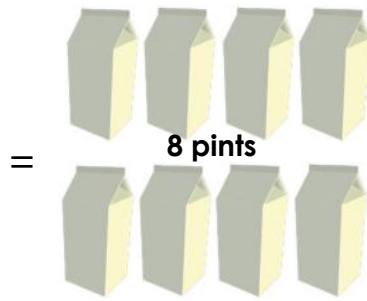
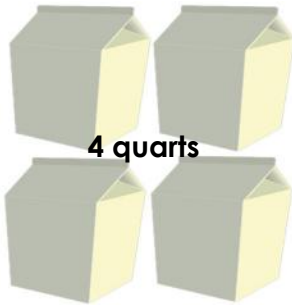
Cut out the cups at the bottom and place them in the squares below. Then, complete the blanks.



_____ cups



_____ cups



_____ cups

Which is more, one gallon or one cup?

Which is more, one quart or one pint?

Which is less, one cup or one pint?

Which is less, one quart or one pint?



Answers

Which is more, one gallon or one cup?

One gallon

Which is more, one quart or one pint?

One quart

Which is less, one cup or one pint?

One cup

Which is less, one quart or one pint?

One pint