


Elapsed time - forward and backwards (1 minute increments)

Grade 3 Time Worksheet


Draw the clock hands to show the time it was or will be.

1.




What time will it be in 4 hours 7 minutes?

2.




What time was it 2 hours 46 minutes ago?

3.




What time was it 2 hours 4 minutes ago?

4.




What time will it be in 4 hours 40 minutes?

5.



What time was it 3 hours 56 minutes ago?

6.

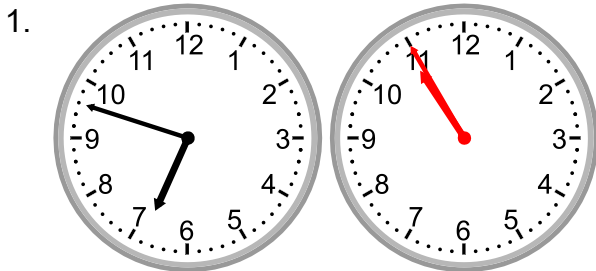


What time will it be in 5 hours 27 minutes?


Elapsed time - forward and backwards (1 minute increments)

Grade 3 Time Worksheet


Answers:




What time will it be in 4 hours 7 minutes?




What time was it 2 hours 46 minutes ago?




What time was it 2 hours 4 minutes ago?



What time will it be in 4 hours 40 minutes?



What time was it 3 hours 56 minutes ago?



What time will it be in 5 hours 27 minutes?