


Elapsed time - forward and backwards (5 minute increments)

Grade 3 Time Worksheet


Draw the clock hands to show the time it was or will be.

1.




What time was it 3 hours 25 minutes ago?

2.




What time was it 4 hours 40 minutes ago?

3.




What time was it 4 hours 20 minutes ago?

4.




What time was it 3 hours 30 minutes ago?

5.



What time will it be in 5 hours 35 minutes?

6.




What time will it be in 1 hour 30 minutes?

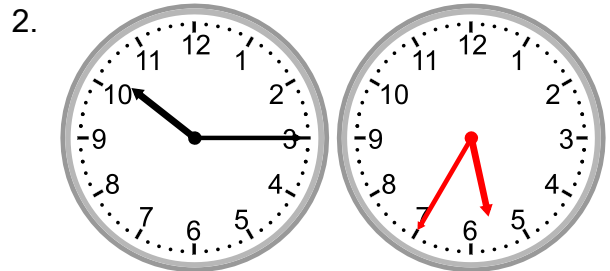
Elapsed time - forward and backwards (5 minute increments)

Grade 3 Time Worksheet


Answers:




What time was it 3 hours 25 minutes ago?




What time was it 4 hours 40 minutes ago?



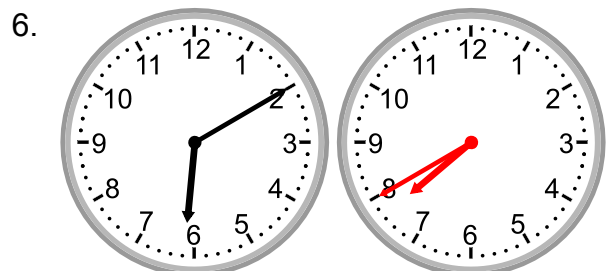
What time was it 4 hours 20 minutes ago?



What time was it 3 hours 30 minutes ago?



What time will it be in 5 hours 35 minutes?



What time will it be in 1 hour 30 minutes?