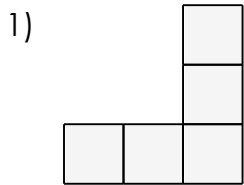


# Areas of shapes using a grid (inches)

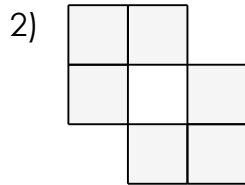
## Grade 3 Geometry Worksheet

Find the area of each shape in square inches.

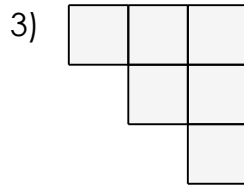
Assume each square is 1 inch wide and tall.



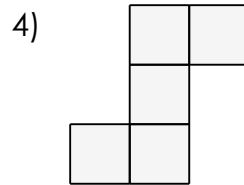
\_\_\_\_\_



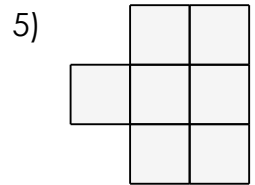
\_\_\_\_\_



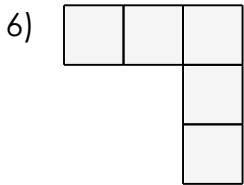
\_\_\_\_\_



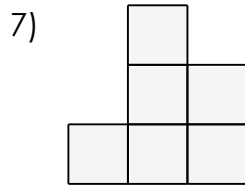
\_\_\_\_\_



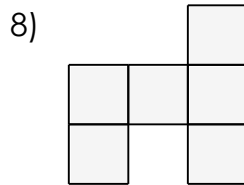
\_\_\_\_\_



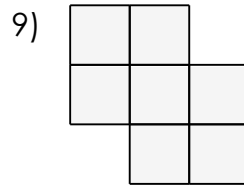
\_\_\_\_\_



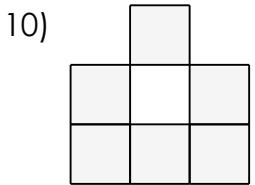
\_\_\_\_\_



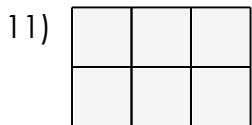
\_\_\_\_\_



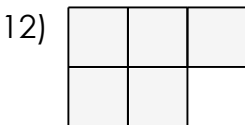
\_\_\_\_\_



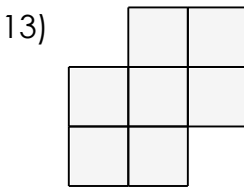
\_\_\_\_\_



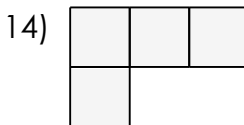
\_\_\_\_\_



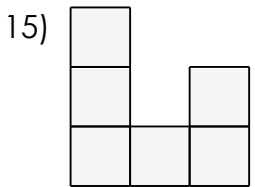
\_\_\_\_\_



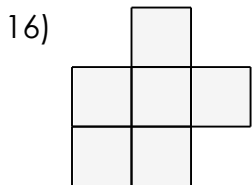
\_\_\_\_\_



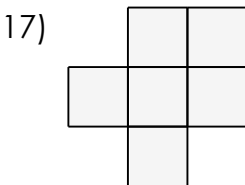
\_\_\_\_\_



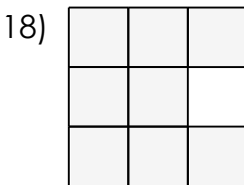
\_\_\_\_\_



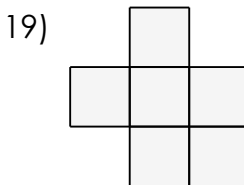
\_\_\_\_\_



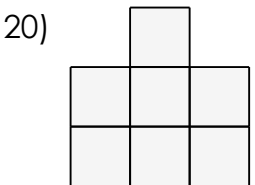
\_\_\_\_\_



\_\_\_\_\_



\_\_\_\_\_



\_\_\_\_\_

# Areas of shapes using a grid (inches)

Grade 3 Geometry Worksheet

Find the area of each shape in square inches.

Assume each square is 1 inch wide and tall.

