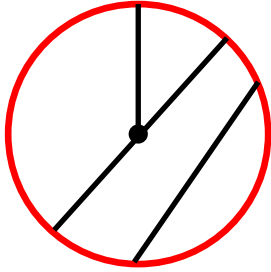


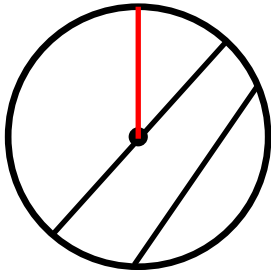
Parts of a circle

Grade 3 Geometry Worksheet

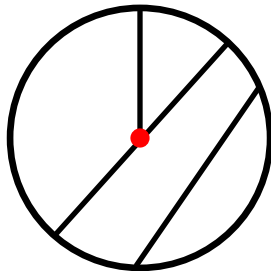
Circle the word for the red part of the circle.



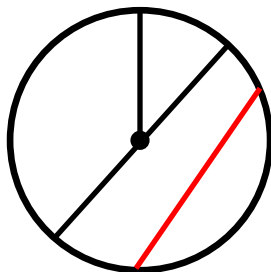
radius
diameter
center
circumference
chord



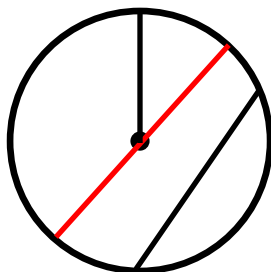
radius
diameter
center
circumference
chord



radius
diameter
center
circumference
chord




radius
diameter
center
circumference
chord

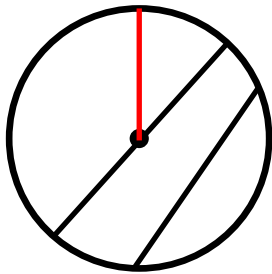


radius
diameter
center
circumference
chord

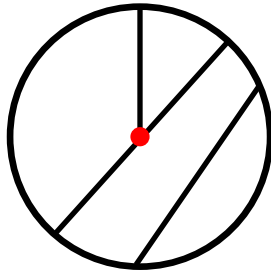
Answers



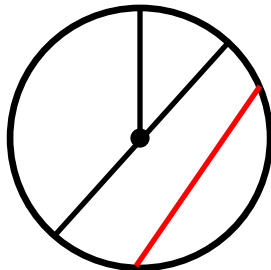
radius
 diameter
 center
 circumference
 chord



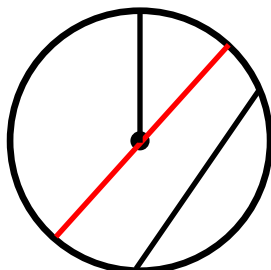
radius
 diameter
 center
 circumference
 chord



radius
 diameter
 center
 circumference
 chord



radius
 diameter
 center
 circumference
 chord



radius
 diameter
 center
 circumference
 chord