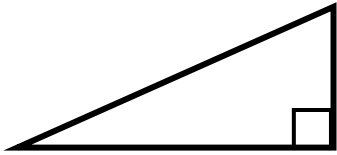


Classifying triangles

Grade 3 Geometry Worksheet

Circle two words to describe each triangle.



Acute

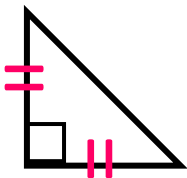
Scalene

Obtuse

Isosceles

Right

Equilateral



Acute

Scalene

Obtuse

Isosceles

Right

Equilateral



Acute

Scalene

Obtuse

Isosceles

Right

Equilateral



Acute

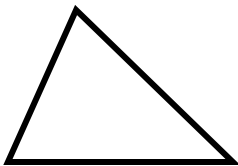
Scalene

Obtuse

Isosceles

Right

Equilateral



Acute

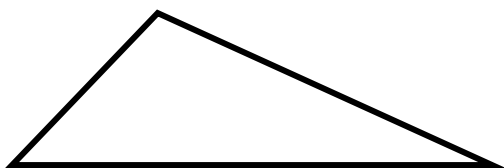
Scalene

Obtuse

Isosceles

Right

Equilateral



Acute

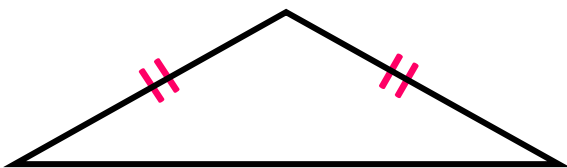
Scalene

Obtuse

Isosceles

Right

Equilateral



Acute

Scalene

Obtuse

Isosceles

Right

Equilateral

Answers

	Acute Obtuse Right	Scalene Isosceles Equilateral
	Acute Obtuse Right	Scalene Isosceles Equilateral
	Acute Obtuse Right	Scalene Isosceles Equilateral
	Acute Obtuse Right	Scalene Isosceles Equilateral
	Acute Obtuse Right	Scalene Isosceles Equilateral
	Acute Obtuse Right	Scalene Isosceles Equilateral
	Acute Obtuse Right	Scalene Isosceles Equilateral