

Classifying angles

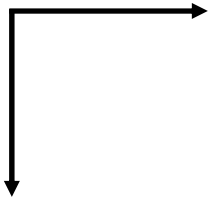
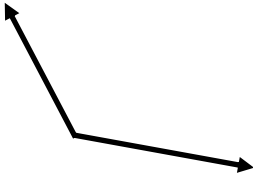

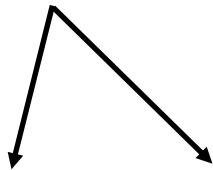
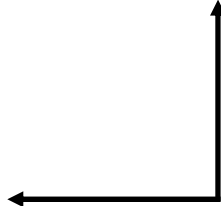
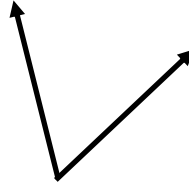
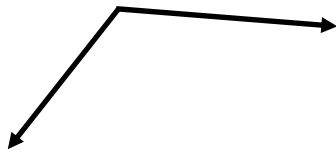
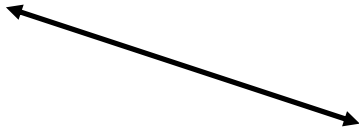
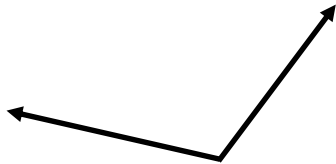
Grade 3 Geometry Worksheet

Write "straight", "right", "acute" or "obtuse" below each angle.

Straight	Right	Acute	Obtuse

_____	_____	_____
_____	_____	_____
_____	_____	_____

Answers

 <p>right</p>	 <p>obtuse</p>	 <p>straight</p>
 <p>acute</p>	 <p>right</p>	 <p>acute</p>
 <p>obtuse</p>	 <p>straight</p>	 <p>obtuse</p>