



Identifying quadrilaterals

Grade 3 Geometry Worksheet

Match the shapes to their names.





square




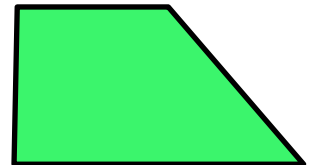
rectangle



rhombus




trapezoid



parallelogram



kite



Answers

