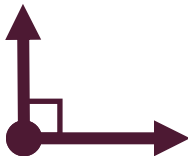

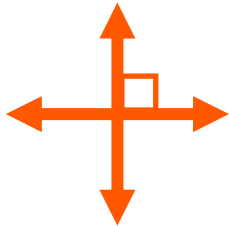


# Lines, segments, rays and angles

## Grade 3 Geometry Worksheet

Match each term with the picture that represents it by drawing a line to connect the term to the picture.



- Line
- Line segment
- Ray
- Parallel lines
- Perpendicular lines
- Intersecting lines  
(not parallel or perpendicular)
- Right angle
- Acute angle
- Obtuse angle
- Straight angle

# Answers

