



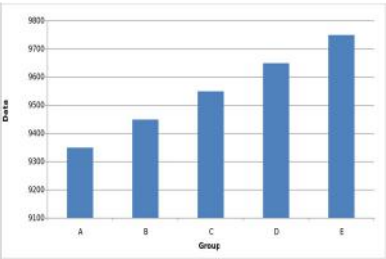
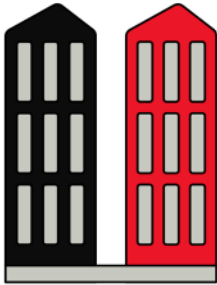
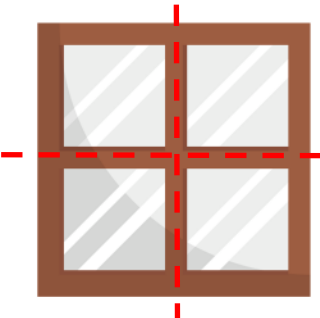







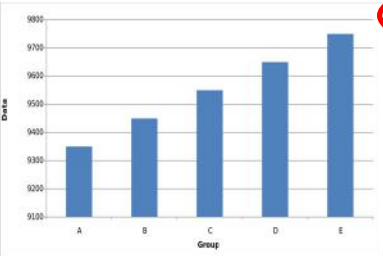
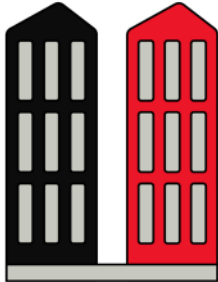
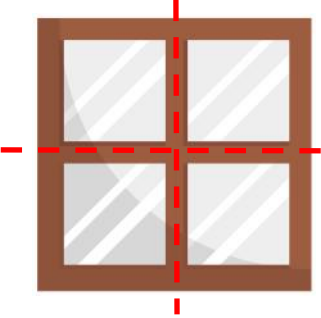

Parallel and perpendicular lines

Grade 3 Geometry Worksheet

Determine if the lines, segments, or rays are parallel, perpendicular or neither. Circle your answer.

	<p>parallel</p> <p>perpendicular</p> <p>neither</p>		<p>parallel</p> <p>perpendicular</p> <p>neither</p>
	<p>parallel</p> <p>perpendicular</p> <p>neither</p>		<p>parallel</p> <p>perpendicular</p> <p>neither</p>
	<p>parallel</p> <p>perpendicular</p> <p>neither</p>		<p>parallel</p> <p>perpendicular</p> <p>neither</p>
	<p>parallel</p> <p>perpendicular</p> <p>neither</p>		<p>parallel</p> <p>perpendicular</p> <p>neither</p>

Answers

 <p>parallel <u>perpendicular</u> neither</p>	 <p><u>parallel</u> perpendicular neither</p>
 <p>parallel perpendicular <u>neither</u></p>	 <p>parallel perpendicular <u>neither</u></p>
 <p><u>parallel</u> perpendicular neither</p>	 <p><u>parallel</u> perpendicular neither</p>
 <p>parallel <u>perpendicular</u> neither</p>	 <p>parallel <u>perpendicular</u> neither</p>