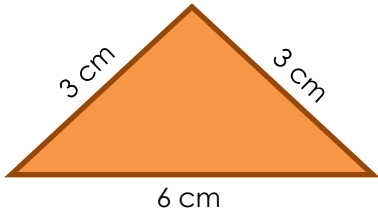


# Perimeters of irregular shapes

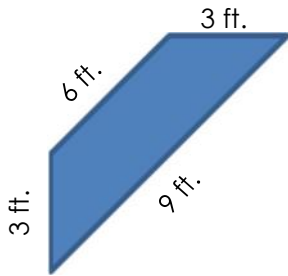
## Grade 3 Geometry Worksheet

Find the perimeter of the shapes shown below.

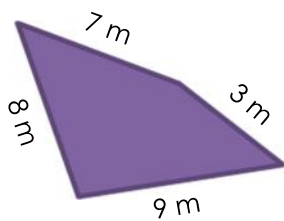
1)



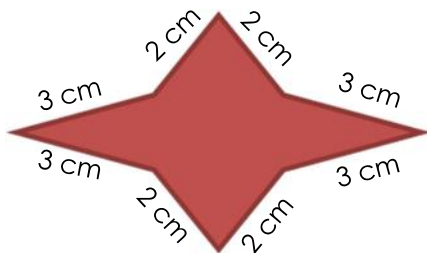

3)



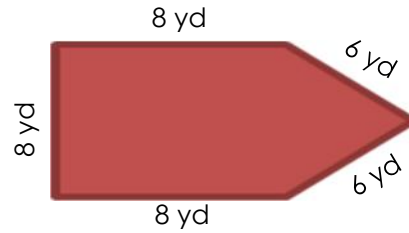

5)



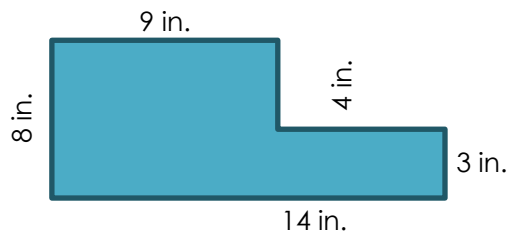

7)



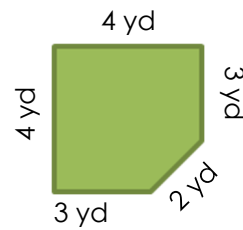

2)



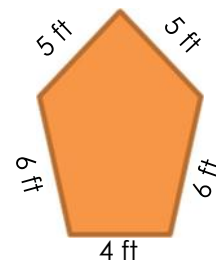

4)




6)




8)



## Answers

- 1) 12 cm
- 2) 36 yd
- 3) 21 ft
- 4) 38 in
- 5) 27 m
- 6) 16 yd
- 7) 20 cm
- 8) 26 ft