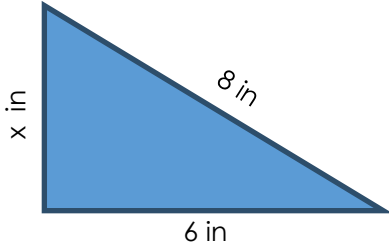


Perimeters of irregular shapes (missing sides)

Grade 3 Geometry Worksheet

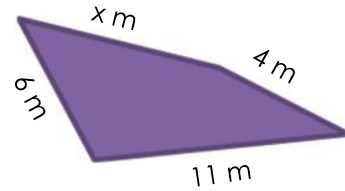
Find the length of the side marked with an "X".

1)



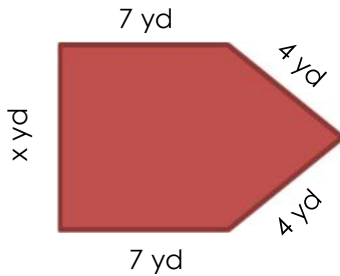
If perimeter = 19 in, $x =$ _____

2)



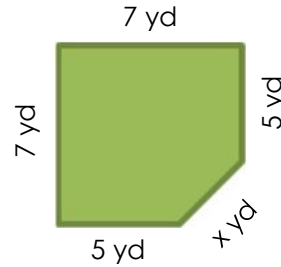
If perimeter = 28 m, $x =$ _____

3)



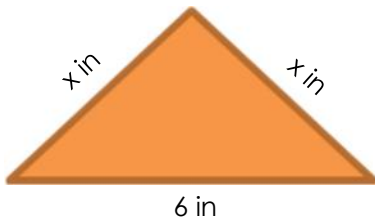
If perimeter = 32 yd, $x =$ _____

4)



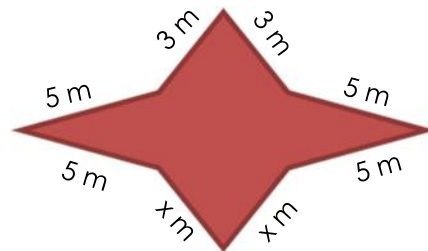
If perimeter = 27 yd, $x =$ _____

5)



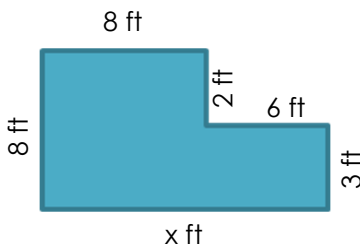
If perimeter = 16 in, $x =$ _____

6)



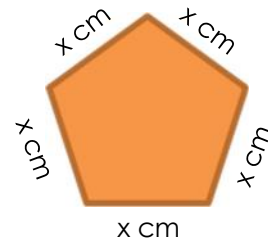
If perimeter = 34 m, $x =$ _____

7)



If perimeter = 41 ft, $x =$ _____

8)



If perimeter = 45 cm, $x =$ _____

Answers

- 1) 5 in
- 2) 7 m
- 3) 10 yd
- 4) 3 yd
- 5) 5 in
- 6) 4 m
- 7) 14 ft
- 8) 9 cm