


# Meaning of division

## Grade 3 Division Worksheet

Divide the food between the kids. Circle the correct equation.



$5 \times 2 =$

$12 \div 4 =$

$8 \div 4 =$

$8 - 4 =$

How many bananas does each kid get? \_\_\_\_\_




$3 \times 3 =$

$6 \div 2 =$

$3 + 3 =$

$6 \times 10 =$

How many muffins does each kid get? \_\_\_\_\_




$6 \div 2 =$

$6 \div 3 =$

$6 \div 4 =$

$6 \div 6 =$

How many pretzels does each kid get? \_\_\_\_\_



$3 \times 4 =$


$12 \div 2 =$

$12 \div 4 =$

$12 - 4 =$

How many cherries does each kid get? \_\_\_\_\_

# Answers



$5 \times 2 =$

$12 \div 4 =$

$8 \div 4 =$

$8 - 4 =$

How many bananas does each kid get? **2**



$3 \times 3 =$

$6 \div 2 =$

$3 + 3 =$

$6 \times 10 =$

How many muffins does each kid get? **3**




$6 \div 2 =$

$6 \div 3 =$

$6 \div 4 =$

$6 \div 6 =$

How many pretzels does each kid get? **2**



$3 \times 4 =$

$12 \div 2 =$

$12 \div 4 =$

$12 - 4 =$

How many cherries does each kid get? **3**