


# Meaning of multiplication sentences

## Grade 3 Multiplication Worksheet


Write the equation that describes how many objects there are.



$$\underline{\quad} \times \underline{\quad} = \underline{\quad}$$

How many cherries are there?

\_\_\_\_\_



$$\underline{\quad} \times \underline{\quad} = \underline{\quad}$$

How many spider legs are there? \_\_\_\_\_



$$\underline{\quad} \times \underline{\quad} = \underline{\quad}$$

How many penguins are there?


\_\_\_\_\_



$$\underline{\quad} \times \underline{\quad} = \underline{\quad}$$

How many flowers are there?

\_\_\_\_\_



$$\underline{\quad} \times \underline{\quad} = \underline{\quad}$$

How many balloons are there?

\_\_\_\_\_



$$\underline{\quad} \times \underline{\quad} = \underline{\quad}$$

How many candies are there?

\_\_\_\_\_

# Answers



$$8 \times 2 = 16$$

How many cherries are there?

16



$$3 \times 8 = 24$$

How many spider legs are there? 24



$$2 \times 3 = 6$$

How many penguins are there?


6



$$3 \times 7 = 21$$

How many flowers are there?

21



$$4 \times 5 = 20$$

How many balloons are there?

20



$$2 \times 4 = 8$$

How many candies are there?

8