










# Units of weight: ounces and pounds

## Grade 3 Measurement Worksheet

Fill in the proper unit (ounces or pounds) for the weight of each object.

Hint: 1 pound = 16 ounces

<p>A sundae: 5 _____</p> 	<p>A hammer: 2 _____</p> 	<p>A boy: 40 _____</p> 
<p>An alarm clock: 10 _____</p> 	<p>A paintbrush: 4 _____</p> 	<p>A picture frame: 1 _____</p> 
<p>A bread: 16 _____</p> 	<p>A laptop: 5 _____</p> 	<p>A wheel: 24 _____</p> 

Draw something that weighs 1 ounce and 1 pound.

<p>1 ounce</p>	<p>1 pound</p>
----------------	----------------

## Answers

A sundae: 5 ounces

A hammer: 2 pounds

A boy: 40 pounds

An alarm clock: 10 ounces

A paintbrush: 4 ounces

A picture frame: 1 pound

A bread: 16 ounces

A laptop: 5 pounds

A wheel: 24 pounds

Example of objects that weigh 1 ounce:

a pencil, a slice of bread, a battery, a grape, an envelope, an ink pen, a key

Example of objects that weigh 1 pound:

a bag of coffee beans, a book, a keyboard, a small painting