










# Metric units of weight: grams (g) and kilograms (kg)

## Grade 3 Measurement Worksheet

Fill in the proper unit (g or kg) for the weight of each object.

Hint: 1 kilogram = 1,000 grams

<p>A tape dispenser: 780 _____</p> 	<p>A bottle of soap: 1 _____</p> 	<p>A book: 550 _____</p> 
<p>A pair of scissors: 180 _____</p> 	<p>A baby girl: 6 _____</p> 	<p>A fridge: 80 _____</p> 
<p>A guitar: 3 _____</p> 	<p>A dumbbell: 5 _____</p> 	<p>A towel: 650 _____</p> 

Draw something that weighs 10 grams and 10 kilograms.

<p>10 grams</p>	<p>10 kilograms</p>
-----------------	---------------------

## Answers

A tape dispenser: 780 g

A bottle of soap: 1 kg

A book: 550 g

A pair of scissors: 180 g

A glass pitcher: 6 kg

A fridge: 80 kg

A guitar: 3 kg

A dumbbell: 5 kg

A towel: 650 g

Example of objects that weigh 10 gram:

a tablespoon of butter, a small pen, a battery, a small eraser

Example of objects that weigh 10 kilograms:

a bike, a bag of flour, a car tire, a high chair, a large mirror