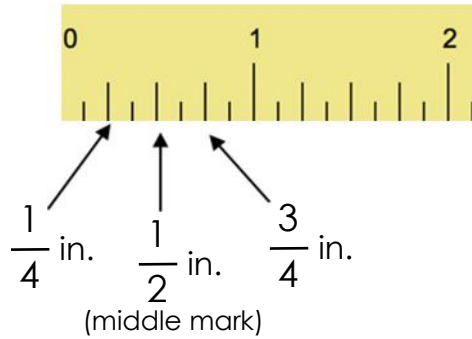




Measuring lengths to the nearest quarter inch

Grade 3 Measurement Worksheet

Use an inch ruler to measure the following lines.



- 1)  _____ inches
- 2)  _____ inches
- 3)  _____ inches
- 4)  _____ inches
- 5)  _____ inches
- 6)  _____ inches

Use an inch ruler to draw lines with the following lengths.

- 7) $5 \frac{3}{4}$ inches
- 8) 3 inches
- 9) $2 \frac{1}{2}$ inches
- 10) $4 \frac{1}{4}$ inches

Answers

1) $2\frac{3}{4}$ inches

2) $\frac{1}{2}$ inches

3) 4 inches

4) $3\frac{1}{2}$ inches

5) $2\frac{1}{2}$ inches

6) 1 inch

7) 

8) 

9) 

10) 