

Multiply by drawing an array

Grade 3 Multiplication Worksheet

For each multiplication equation, draw a table of boxes and solve the equation.

$3 \times 2 = \underline{\quad}$

$5 \times 2 = \underline{\quad}$

$4 \times 3 = \underline{\quad}$

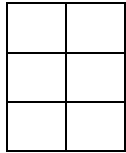
$2 \times 6 = \underline{\quad}$

$7 \times 3 = \underline{\quad}$

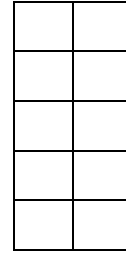
$3 \times 8 = \underline{\quad}$

Answers

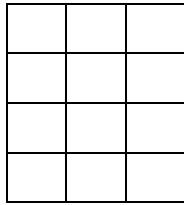
$$3 \times 2 = 6$$



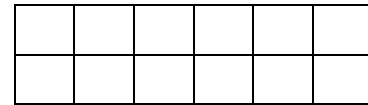
$$5 \times 2 = 10$$



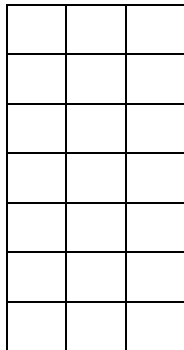
$$4 \times 3 = 12$$



$$2 \times 6 = 12$$



$$7 \times 3 = 21$$



$$3 \times 8 = 24$$

