









Metric units of length: cm, m and km

Grade 3 Measurement Worksheet

Circle the proper units.

<p>Distance between two continents</p> 	<p>Distance of a marathon race</p> 	<p>Length of a baby's feet</p> 
cm / m / km	cm / m / km	cm / m / km
<p>Length of a dolphin</p> 	<p>Width of a towel</p> 	<p>Length of a sailboat</p> 
cm / m / km	cm / m / km	cm / m / km
<p>Size of a frying pan</p> 	<p>Length of a golf course</p> 	<p>Height of a door</p> 
cm / m / km	cm / m / km	cm / m / km

Answers

<p>Distance between two continents</p> 	<p>Distance of a marathon race</p> 	<p>Length of a baby's feet</p> 
<p>cm / m / km</p>	<p>cm / m / km</p>	<p>cm / m / km</p>
<p>Length of a dolphin</p> 	<p>Width of a towel</p> 	<p>Length of a sailboat</p> 
<p>cm / m / km</p>	<p>cm / m / km</p>	<p>cm / m / km</p>
<p>Size of a frying pan</p> 	<p>Length of a golf course</p> 	<p>Height of a door</p> 
<p>cm / m / km</p>	<p>cm / m / km</p>	<p>cm / m / km</p>