

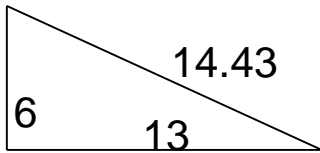
## Area of Right Triangles

---

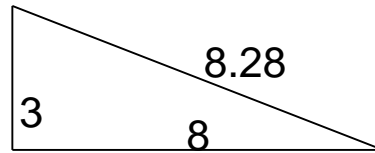
### Grade 5 Geometry Worksheet

Find the area.

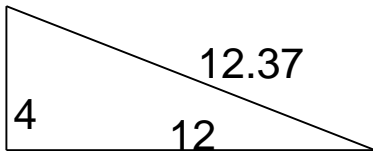
1.



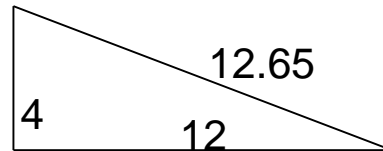
4.



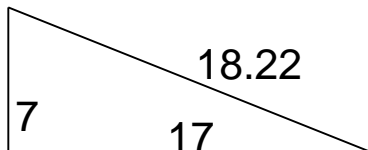
2.



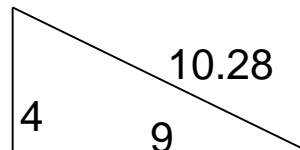
5.



3.



6.



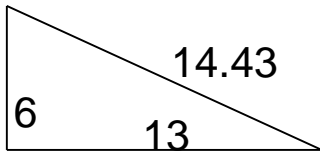
## Area of Right Triangles

---

### Grade 5 Geometry Worksheet

Find the area.

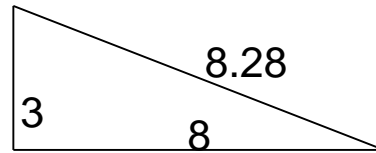
1.



$$A = 39$$

---

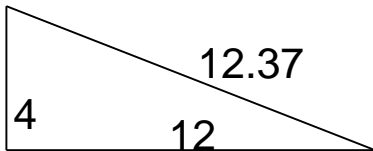
4.



$$A = 12$$

---

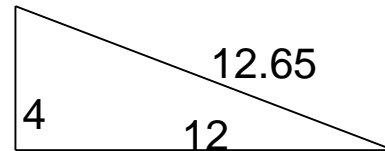
2.



$$A = 24$$

---

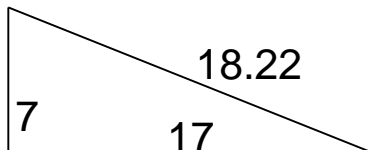
5.



$$A = 24$$

---

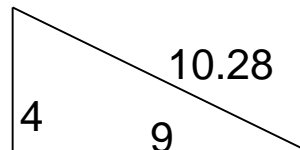
3.



$$A = 59.5$$

---

6.



$$A = 18$$

---