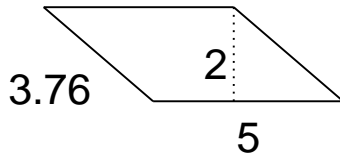


Area of Triangles, Parallelograms and Trapezoids

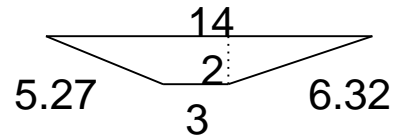
Grade 5 Geometry Worksheet

Find the area.

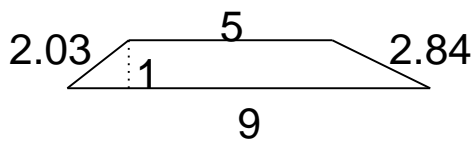
1.



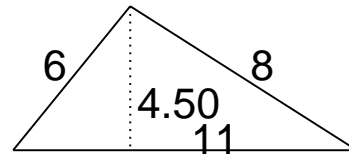
4.



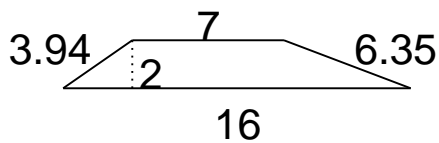
2.



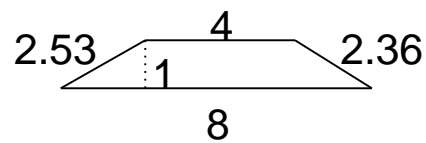
5.



3.



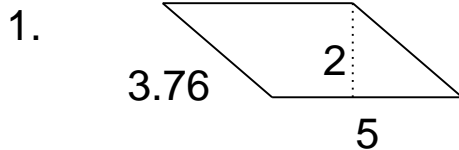
6.



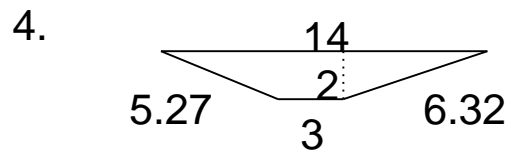
Area of Triangles, Parallelograms and Trapezoids

Grade 5 Geometry Worksheet

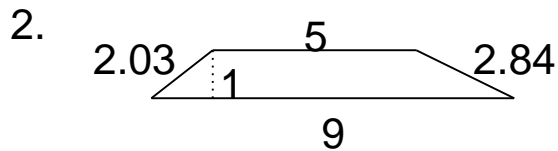
Find the area.



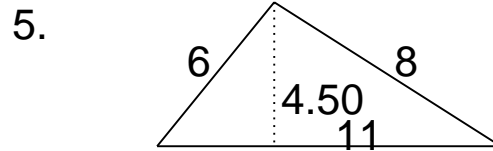
$A = 10$



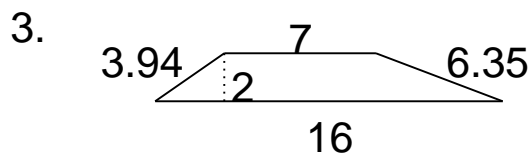
$A = 17$



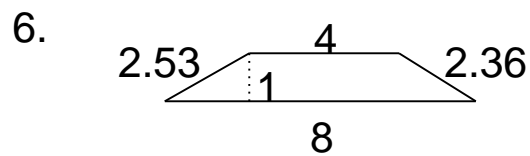
$A = 7$



$A = 24.75$



$A = 23$



$A = 6$