

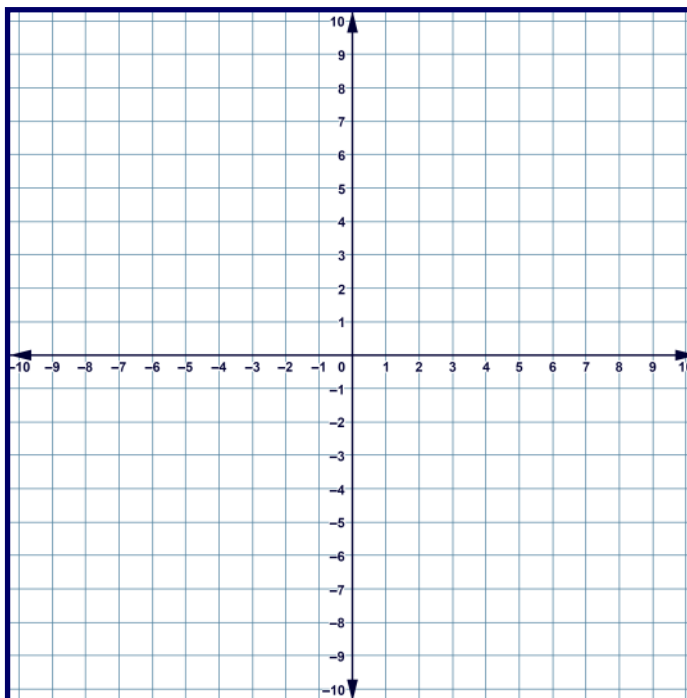
Function tables and the coordinate plane

Grade 5 Geometry Worksheet

Complete the table below. Write the corresponding ordered pairs and plot them on the coordinate plane

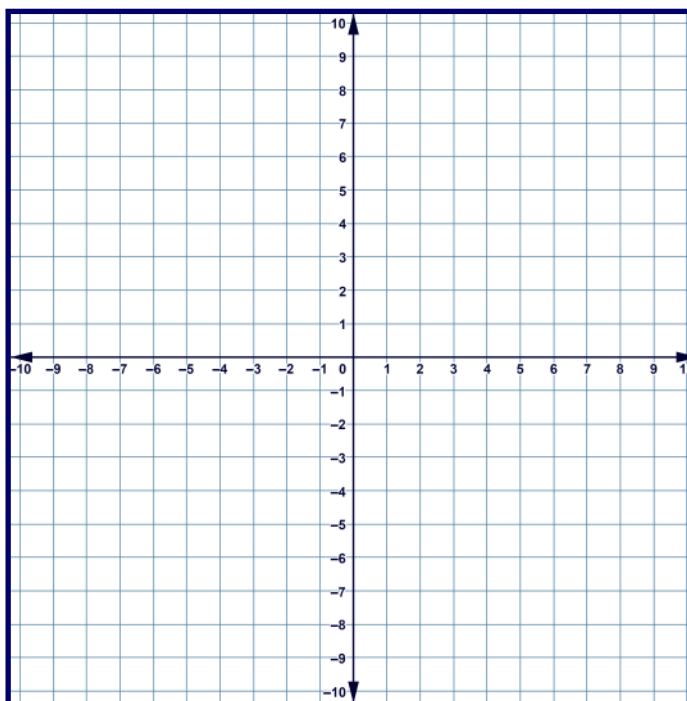
Rule: $y = 2x$

x	y	Ordered Pairs
-2		
-1		
0		
1		
2		



Rule: $y = x + 5$

x	y	Ordered Pairs
-2		(<u> </u> , <u> </u>)
-1		
0		
1		
2		



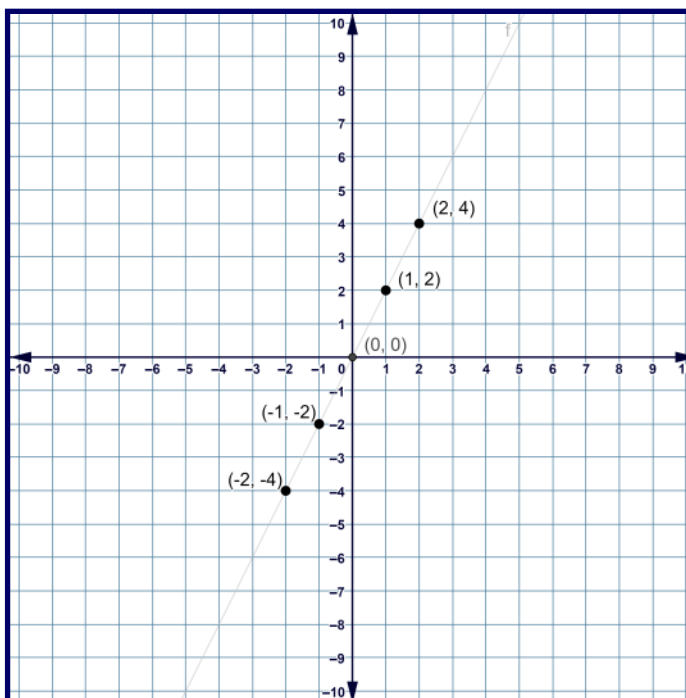
Function tables and the coordinate plane

Grade 5 Geometry Worksheet

Complete the table below. Write the corresponding ordered pairs and plot them on the coordinate plane

Rule: $y = 2x$

x	y	Ordered
-2	-4	$(-2, -4)$
-1	-2	$(-1, -2)$
0	0	$(0, 0)$
1	2	$(1, 2)$
2	4	$(2, 4)$



Rule: $y = x + 5$

x	y	Ordered
-2	3	$(-2, 3)$
-1	4	$(-1, 4)$
0	5	$(0, 5)$
1	6	$(1, 6)$
2	7	$(2, 7)$

