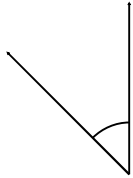


Measure and classify angles

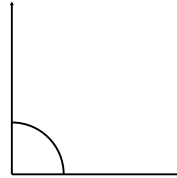
Grade 5 Geometry Worksheet

Measure the angle with a protractor. Is it acute, obtuse or a right angle?

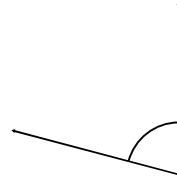
1.



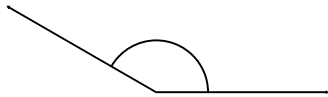
2.



3.



4.



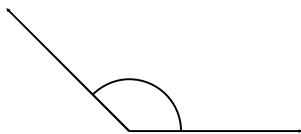
5.




6.



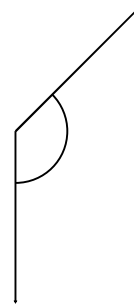
7.



8.



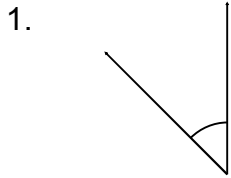
9.



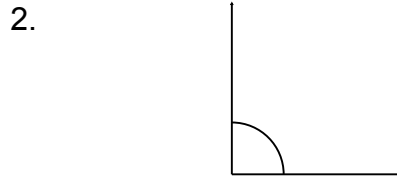
Measure and classify angles

Grade 5 Geometry Worksheet

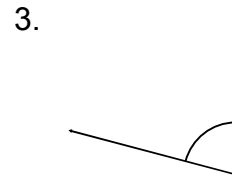
Measure the angle with a protractor. Is it acute, obtuse or a right angle?



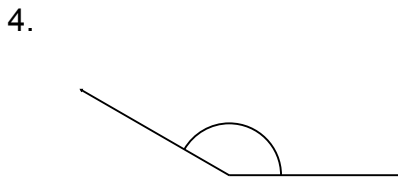
45° Acute



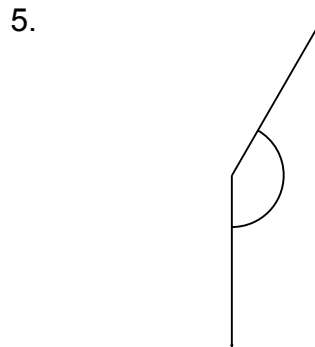
90° Right



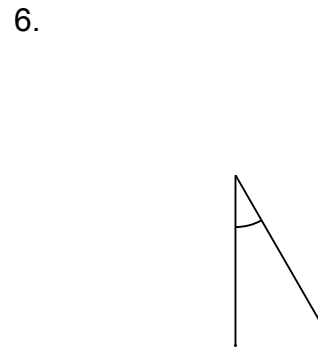
75° Acute




150° Obtuse



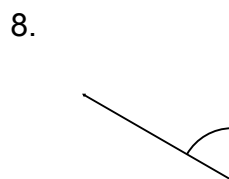
150° Obtuse



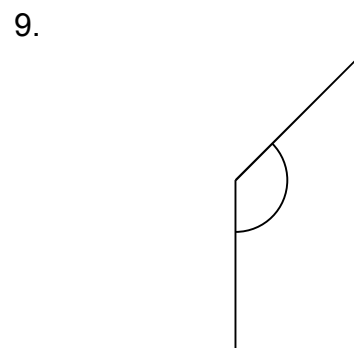
30° Acute



135° Obtuse



60° Acute



135° Obtuse