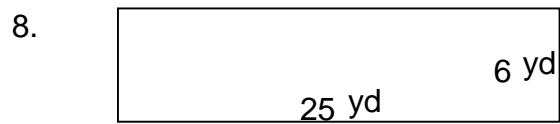
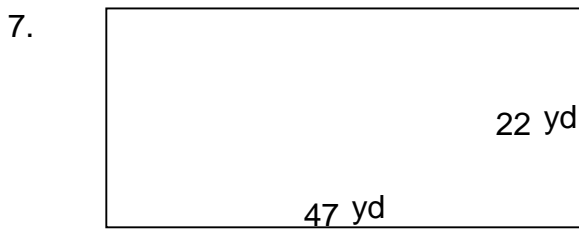
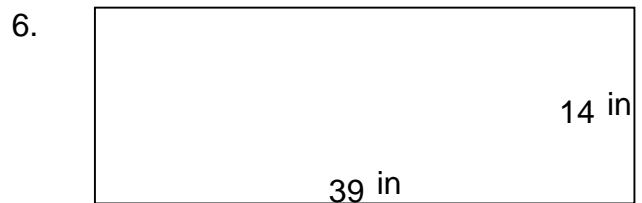
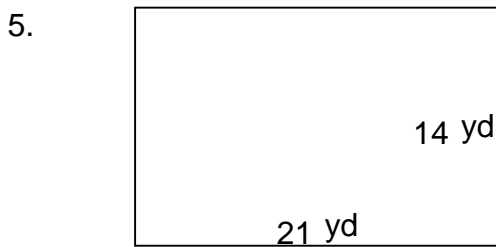
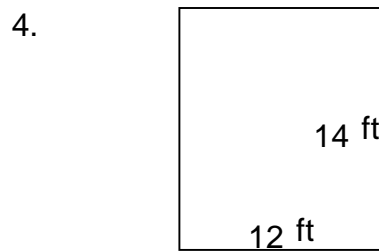
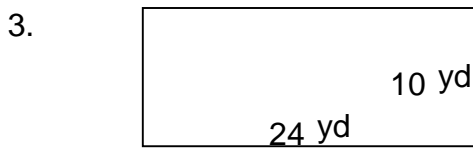
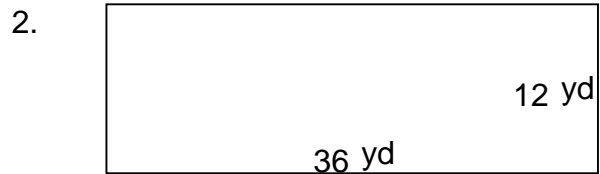
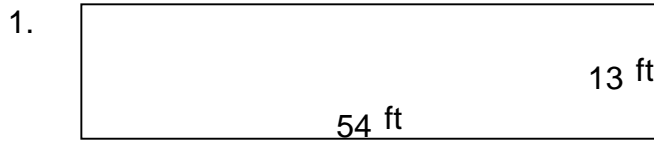


Rectangles - area and perimeter

Grade 5 Geometry Worksheet

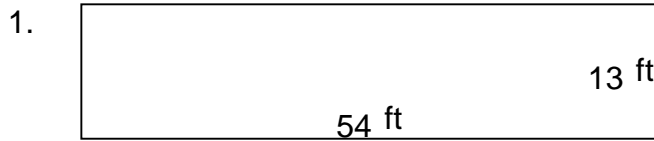
Find the perimeter and area of each rectangle.



Rectangles - area and perimeter

Grade 5 Geometry Worksheet


Find the perimeter and area of each rectangle.



$$P = 134 \text{ ft} \quad A = 702 \text{ ft}^2$$



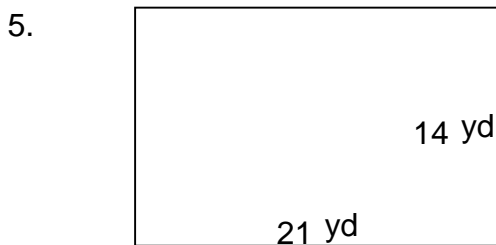
$$P = 96 \text{ yd} \quad A = 432 \text{ yd}^2$$



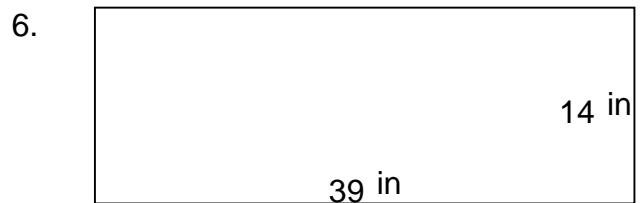
$$P = 68 \text{ yd} \quad A = 240 \text{ yd}^2$$



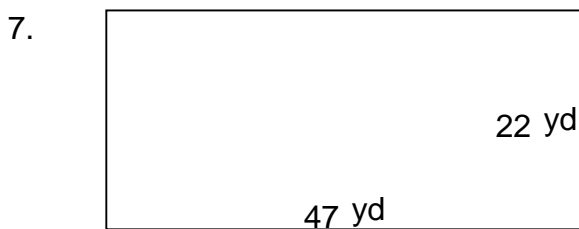
$$P = 52 \text{ ft} \quad A = 168 \text{ ft}^2$$



$$P = 70 \text{ yd} \quad A = 294 \text{ yd}^2$$



$$P = 106 \text{ in} \quad A = 546 \text{ in}^2$$



$$P = 138 \text{ yd} \quad A = 1,034 \text{ yd}^2$$



$$P = 62 \text{ yd} \quad A = 150 \text{ yd}^2$$