


Rectangles - area and perimeter

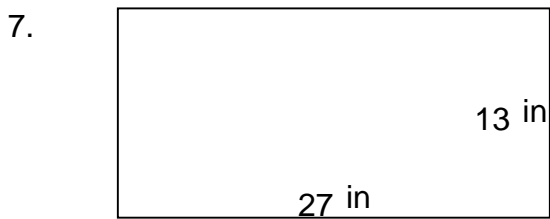
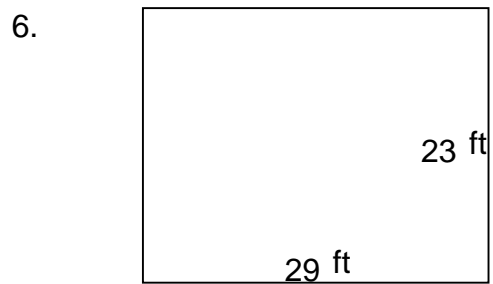
Grade 5 Geometry Worksheet

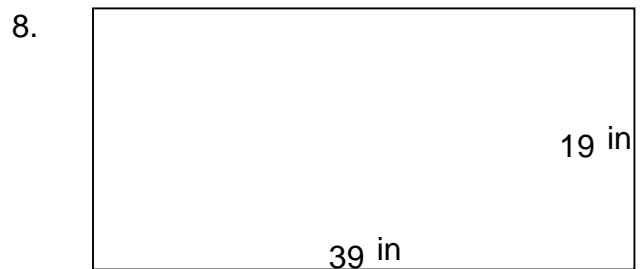
Find the perimeter and area of each rectangle.







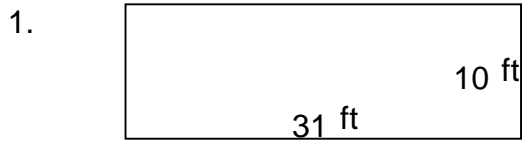




Rectangles - area and perimeter

Grade 5 Geometry Worksheet


Find the perimeter and area of each rectangle.



$$P = 82 \text{ ft} \quad A = 310 \text{ ft}^2$$



$$P = 66 \text{ ft} \quad A = 242 \text{ ft}^2$$



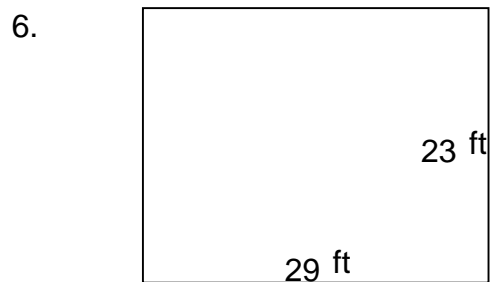
$$P = 86 \text{ yd} \quad A = 390 \text{ yd}^2$$



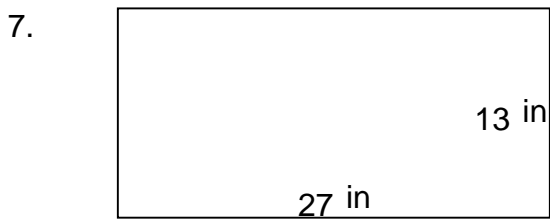
$$P = 136 \text{ ft} \quad A = 832 \text{ ft}^2$$




$$P = 94 \text{ in} \quad A = 342 \text{ in}^2$$



$$P = 104 \text{ ft} \quad A = 667 \text{ ft}^2$$



$$P = 80 \text{ in} \quad A = 351 \text{ in}^2$$



$$P = 116 \text{ in} \quad A = 741 \text{ in}^2$$