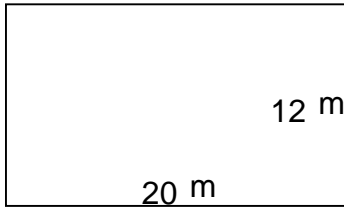


Rectangles - area and perimeter (metric)

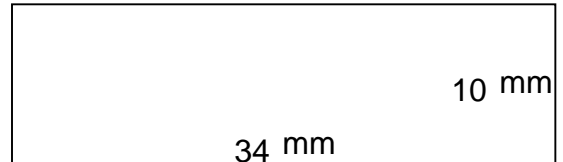
Grade 5 Geometry Worksheet

Find the perimeter and area of each rectangle.

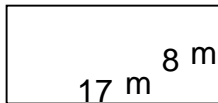
1.



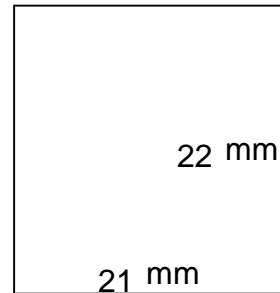
2.



3.



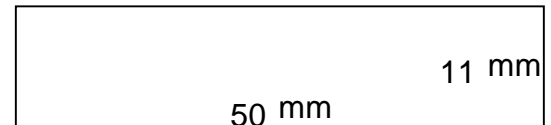
4.



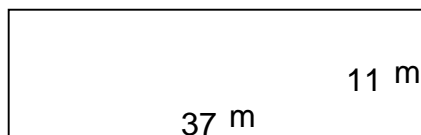
5.



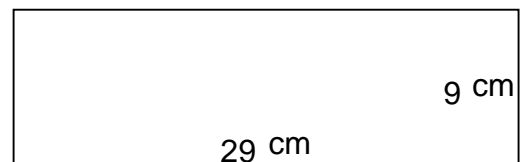
6.



7.



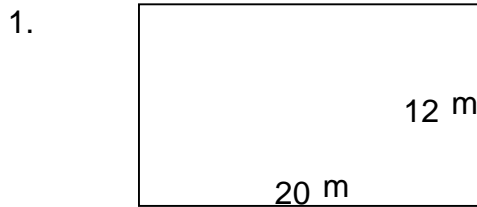
8.



Rectangles - area and perimeter (metric)

Grade 5 Geometry Worksheet

Find the perimeter and area of each rectangle.



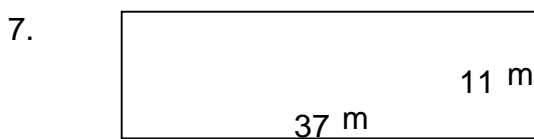
$$P = 64 \text{ m} \quad A = 240 \text{ m}^2$$



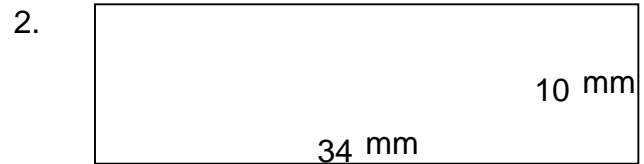
$$P = 50 \text{ m} \quad A = 136 \text{ m}^2$$



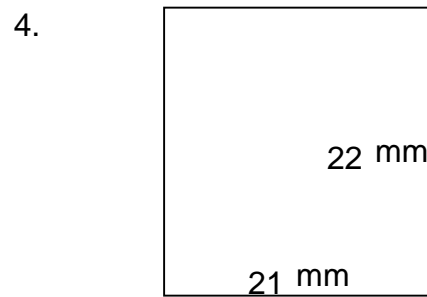
$$P = 62 \text{ m} \quad A = 168 \text{ m}^2$$



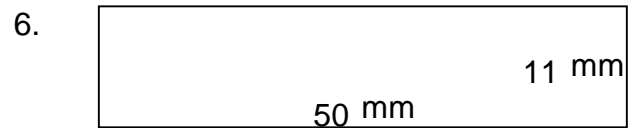
$$P = 96 \text{ m} \quad A = 407 \text{ m}^2$$



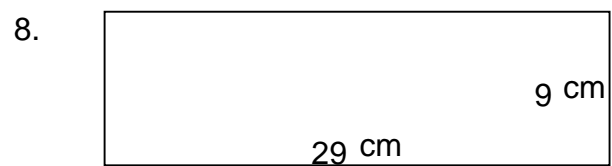
$$P = 88 \text{ mm} \quad A = 340 \text{ mm}^2$$



$$P = 86 \text{ mm} \quad A = 462 \text{ mm}^2$$



$$P = 122 \text{ mm} \quad A = 550 \text{ mm}^2$$



$$P = 76 \text{ cm} \quad A = 261 \text{ cm}^2$$