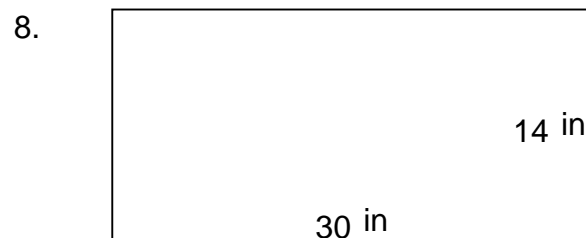
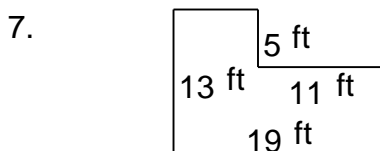
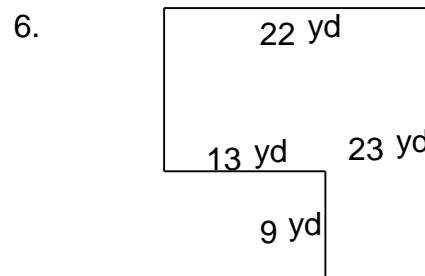
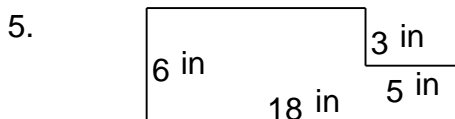
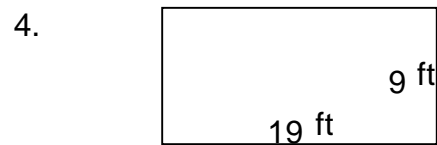

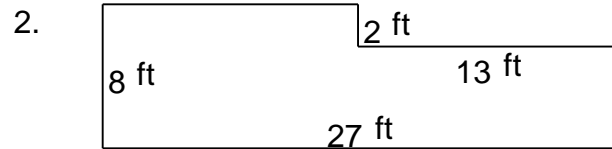



Rectangular shapes - area and perimeter

Grade 5 Geometry Worksheet

Find the perimeter and area of each rectangular shape.




Rectangular shapes - area and perimeter

Grade 5 Geometry Worksheet


Find the perimeter and area of each rectangular shape.



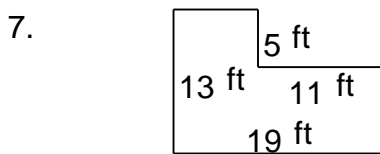
$P = 104 \text{ yd}$ $A = 532 \text{ yd}^2$



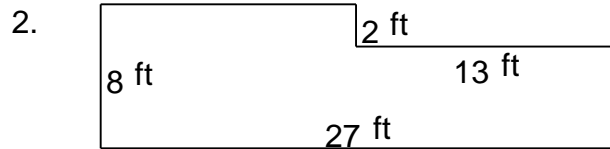
$P = 106 \text{ yd}$ $A = 493 \text{ yd}^2$



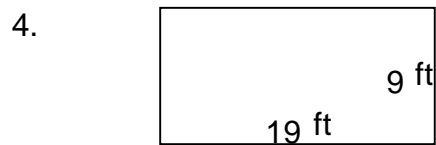
$P = 48 \text{ in}$ $A = 93 \text{ in}^2$



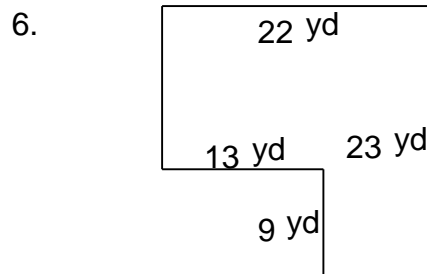
$P = 64 \text{ ft}$ $A = 192 \text{ ft}^2$



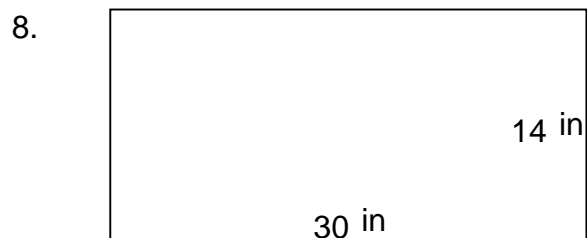
$P = 70 \text{ ft}$ $A = 190 \text{ ft}^2$



$P = 56 \text{ ft}$ $A = 171 \text{ ft}^2$



$P = 90 \text{ yd}$ $A = 389 \text{ yd}^2$



$P = 88 \text{ in}$ $A = 420 \text{ in}^2$