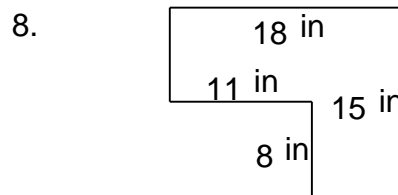

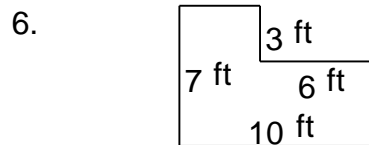
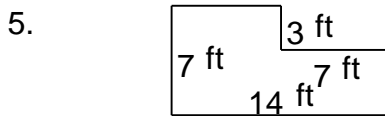
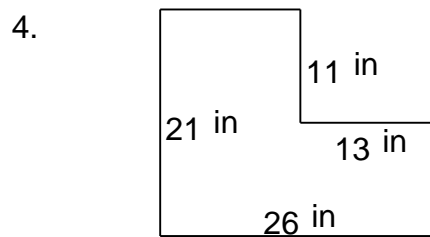
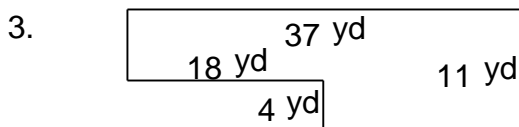
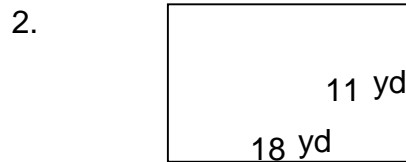
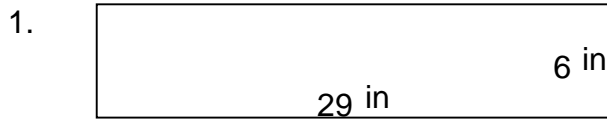


# Rectangular shapes - area and perimeter

## Grade 5 Geometry Worksheet

Find the perimeter and area of each rectangular shape.



# Rectangular shapes - area and perimeter

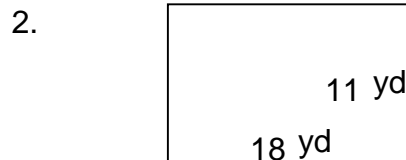
## Grade 5 Geometry Worksheet

Find the perimeter and area of each rectangular shape.



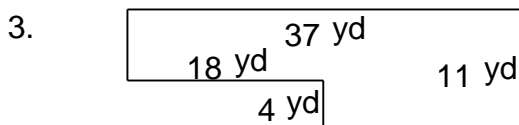
---


$$P = 70 \text{ in} \quad A = 174 \text{ in}^2$$



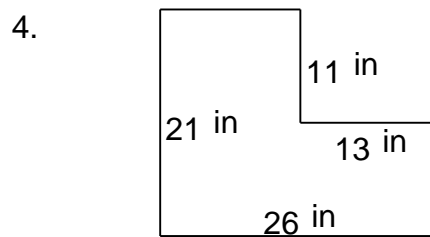
---


$$P = 58 \text{ yd} \quad A = 198 \text{ yd}^2$$



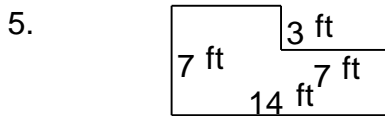
---


$$P = 96 \text{ yd} \quad A = 335 \text{ yd}^2$$



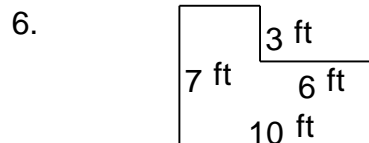
---


$$P = 94 \text{ in} \quad A = 403 \text{ in}^2$$



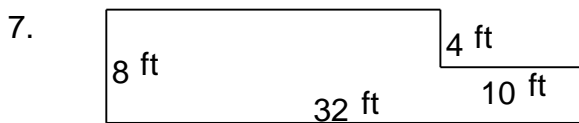
---


$$P = 42 \text{ ft} \quad A = 77 \text{ ft}^2$$



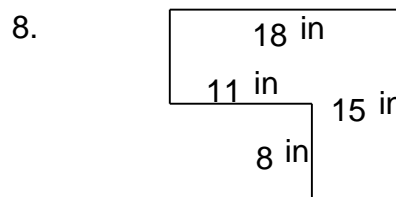
---


$$P = 34 \text{ ft} \quad A = 52 \text{ ft}^2$$



---


$$P = 80 \text{ ft} \quad A = 216 \text{ ft}^2$$



---


$$P = 66 \text{ in} \quad A = 182 \text{ in}^2$$